



TOM NEWBY SCHOOL



Subject	Geography	Examiner	Miss M Albertyn
Date	June 2021	Total marks	25
Grade	4	Duration	1 hour
		Moderator	Miss M Botha
Special instructions/ Equipment			

This Exam has been compiled using notes and information contained in the Tom Newby School book. The marking memorandum has been compiled accordingly. While alternative responses will be given due acknowledgement, the official memorandum will be considered a priority document to ensure uniformity of marking.

NAME: _____

CLASS: 4

Instructions

- Read the questions carefully.
- Look at the mark allocation.
- Answer all the questions and work neatly.
- Think carefully before you answer.
- Breathe, relax and best of luck!



SECTION A

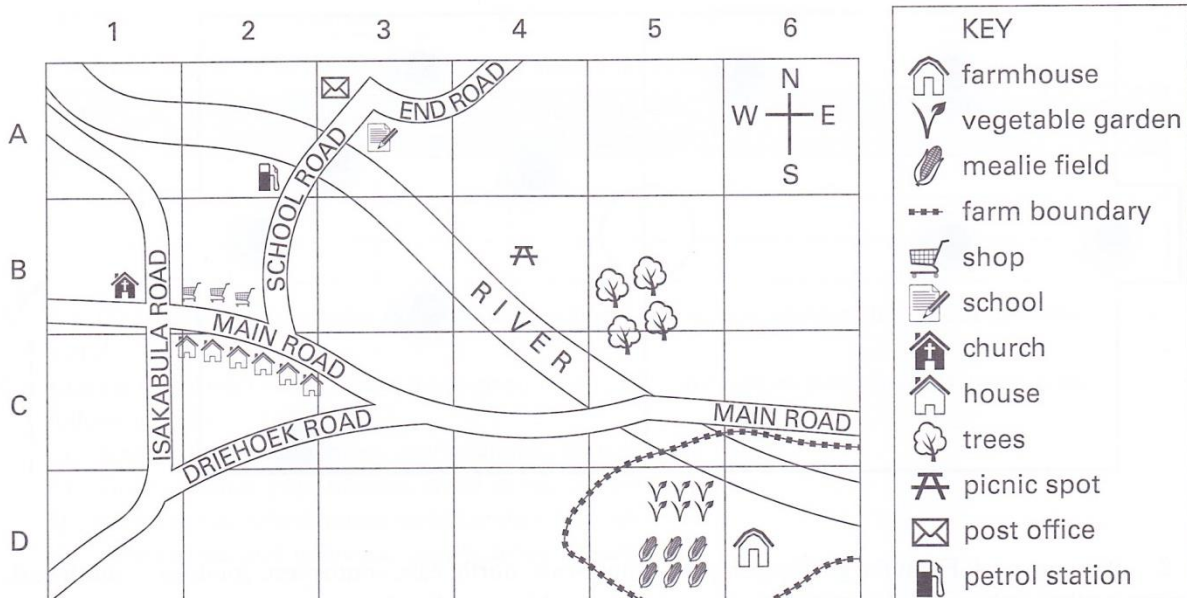
Settlements

[10]

Question 1: Describing a short route

[6]

Look at the map with the street names below to answer the question that follow.



Write down clear instructions to direct a person from the post office to the church. Give the shortest route and include 2 landmarks on the way. (6)


Question 2: Basic needs

[4]

Read the following story and answer the question that follow.

Nomsa and Vuyo live in a village in KwaZulu-Natal. They live with their grandmother in a house on a small plot of land. There is no hospital and only a spaza shop. Their grandmother grows enough food on their plot for them to eat and they have a goat and a few chickens for milk, eggs and meat. Their grandmother cooks their food in a pot over the fire. They have no electricity. There is a tap near their house that many families use for water. The clinic sister comes to the village once every two weeks. People who are sick go to see her then. There is a primary school in the village.

OXFORD Successful Social Sciences Grade 4 pg 18



Compare Nomsa and Vuyos' lives to your own, by writing down 4 differences. (4)

Nomsa and Vuyo	My life
1.	
2.	
3	
4.	

SECTION B

Mapwork

[15]

Question 3:

[5]

Fill in the missing words:

3.1 A _____ is a sign or picture that is used in place of an object on a map. (1)

3.2 The town where the leader and officials of the province work, is called the _____ (1)

3.3 South Africa is divided into _____ provinces. (1)

3.4 **Underline** the correct answer: A view that is drawn from above is called: a plan / a side view. (1)

3.5 **True or false.** If the statement is false, correct it.

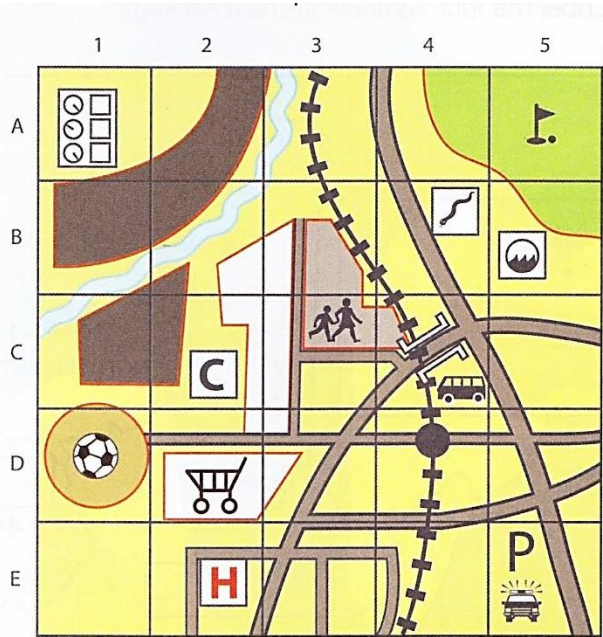
On maps, the sea is always coloured in green.

 _____ (1)

Question 4:

[5]

Look at the map with the grid squares below to answer the questions.



Key		
+++	railway	roads
■	factories	river
□	buildings	golf course
H	hospital	taxis
P	police station	bridge
👤	school	C
🚰	sewage works	🏈
🏈	sports stadium	🐍
🐍	snake park	🏊
🏊	swimming pool	🚂
🚂	train station	🛒
🛒	shopping centre	

RANBY, P Social Sciences Grade 4 page 53

4.1 Name the places that are in these grid squares:

a. E5 _____ (1)


b. C3 _____ (1)

4.2 Give the grid squares for the following places:

a. sports stadium _____ (1)

b. snake park _____ (1)

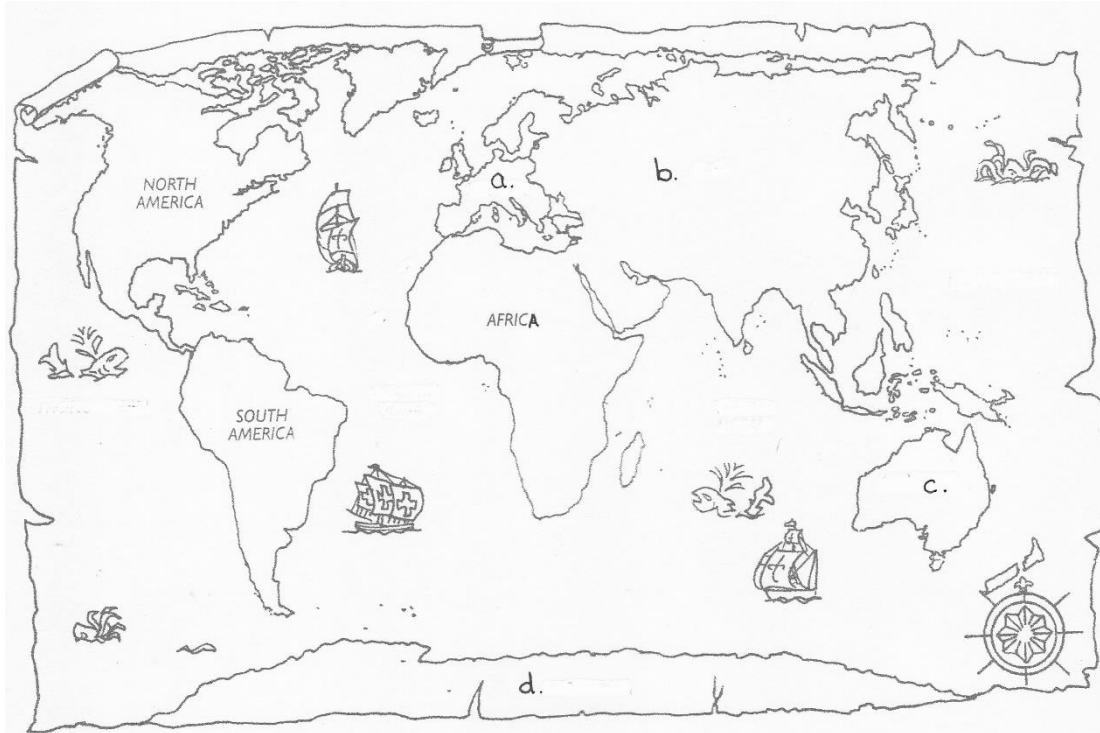
4.3 Draw the symbol for a golf course. (1)



Question 5

[5]

Look at the world map carefully. Write the names of the continents from a to d.



5.1

a) _____ b) _____

c) _____ d) _____ (4÷2=2)

5.2. Label the Atlantic Ocean on the map. (1)

5.3. Which continent lies to the West of Australia? (1)

5.4. Which continent lies to the North of South America? (1)

PLEASE CHECK ALL YOUR ANSWERS VERY CAREFULLY!

**Grade 4 Geography Exam Analysis
June 2021**

Name: _____ Grade: 4 _____

Teacher use only

Question	1	2	3	4	5
Possible mark	6	4	5	5	5
Mark achieved					
Moderated mark					