

Examples



Click here

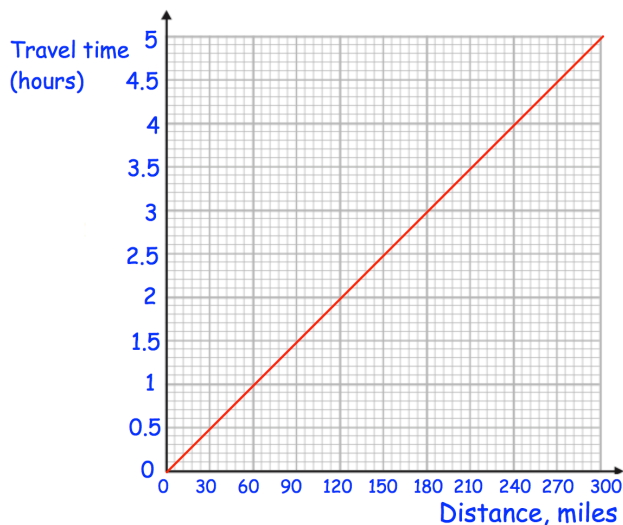


Scan here

Workout

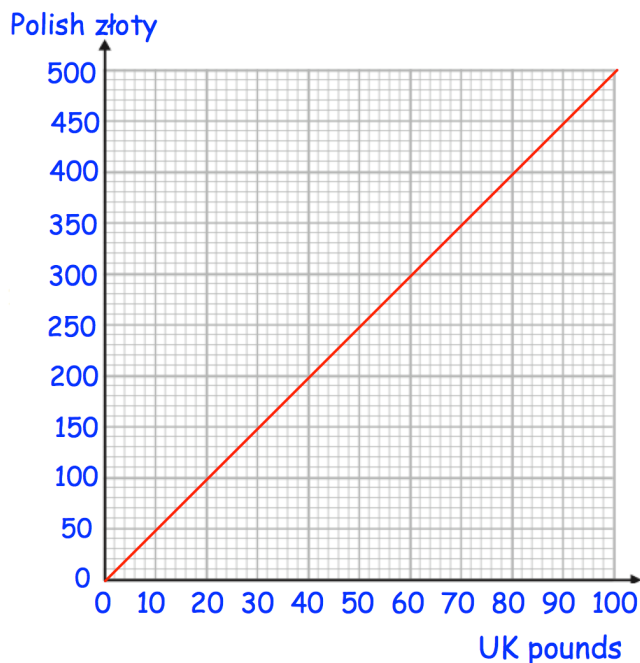
Question 1:

- (a) How long should a 120 mile journey take?
- (b) How long should a 270 mile journey take?
- (c) Carlos has spent 1 hour travelling. What distance is he expected to have travelled?
- (d) Rosie has spent 3.5 hours travelling. What distance is she expected to have travelled?



Question 2:

- (a) Change £20 into Polish złoty
- (b) Change £90 into Polish złoty
- (c) Change 300zł into UK pounds
- (d) Change 450zł into UK pounds
- (e) Change £50 into Polish złoty
- (f) Change £200 into Polish złoty
- (g) Change 800zł into UK pounds

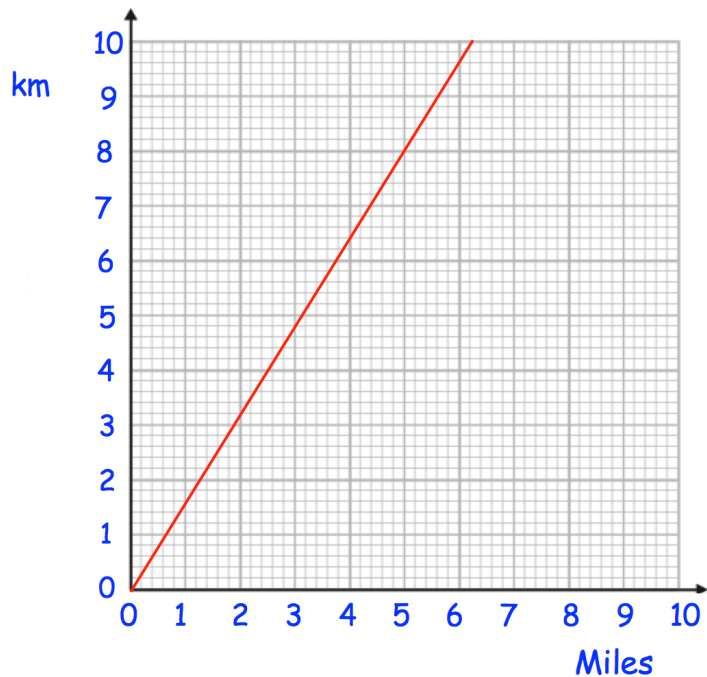


Conversion Graphs

Videos 151 and 152 on www.corbettmaths.com

Question 3: This conversion graph can be used to change between miles and kilometres.

- (a) Change 5 miles into kilometres
- (b) Change 1 mile into kilometres
- (c) Change 6km into miles
- (d) Change 4.8km into miles
- (e) Change 20 miles into kilometres
- (f) Change 16km into miles



Question 4: Draw conversion graphs for the following sets of information.

- (a) A conversion graph to convert between UK pound and South African Rand.

Horizontal axis: UK pound from £0 to 10

Vertical axis: South African Rand from 0 to 200 Rand

Pounds	0	1	2	3
SA Rand	0	20	40	60

- (b) A conversion graph for hours and cost of driving lessons.

Horizontal axis: Hours from 0 to 10

Vertical axis: Cost (decide scale yourself)

Hours	1	4
Cost	£15	£60

- (c) A conversion graph to show how to change from kilograms to pounds.

Horizontal axis: Kilograms from 0kg to 10kg

Vertical axis: Pounds (decide scale yourself)

Kilograms, kg	5
Pounds, lb	11

- (d) A conversion graph to convert between Euros and US Dollars.

Horizontal axis: Euros from 0 to €100

Vertical axis: US Dollar (decide scale yourself)

US Dollars	\$ 77
Euros	€ 70

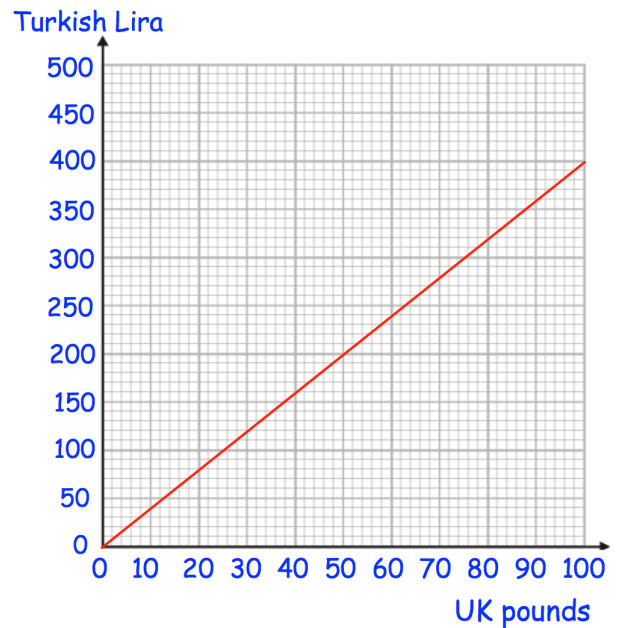
Apply

Question 1:

Richard has ₺300 and £800.
He buys a flight that costs ₺900

He pays use the ₺300 and some of the pounds.

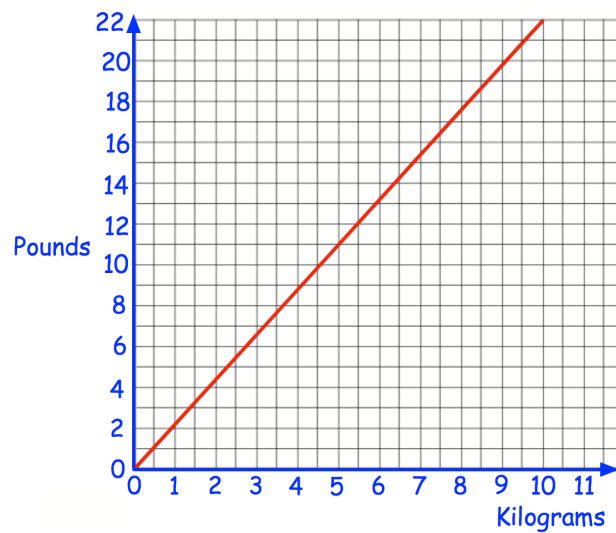
Work out how many pounds he has left.



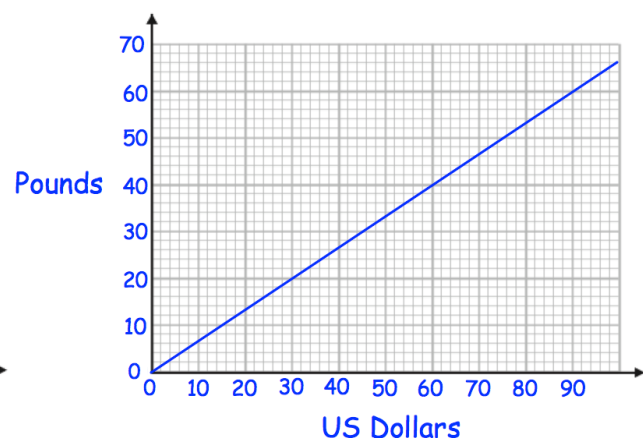
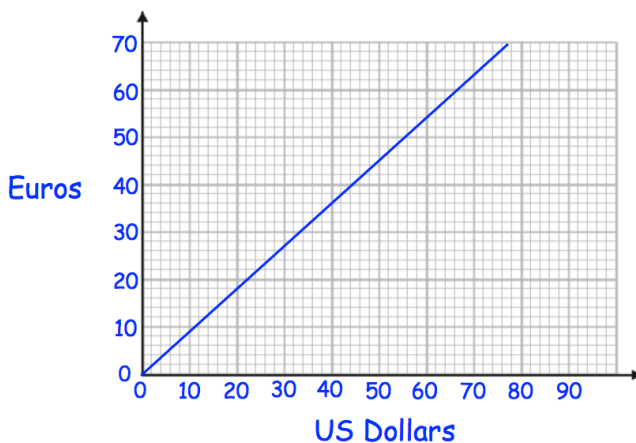
Question 2:

Jenny's weight is 65kg.
1 stone = 14 pounds.

What is Jenny's weight in stones and pounds?



Question 3: The two conversion graphs below show how to change between some currencies.
Convert £800 into Euros.



Conversion Graphs

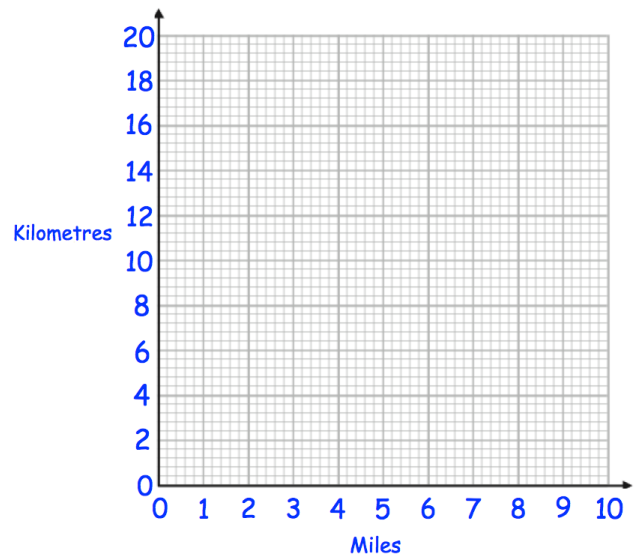
Videos 151 and 152 on www.corbettmaths.com

Question 4: 5 miles \approx 8 kilometres


(a) Use this information to draw a conversion graph.

A car is travelling 60km/h.

(b) Use the graph to convert this into mph.



Answers



Click here



Scan here