



Subtraction using pictures

Grade 1 Subtraction Worksheet

Cross out the shapes according to the number sentences. Then, find the answers.



$$6 - 4 = \underline{\quad}$$



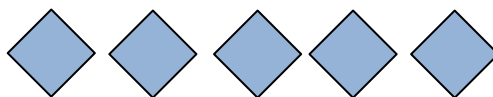
$$3 - 1 = \underline{\quad}$$



$$7 - 6 = \underline{\quad}$$

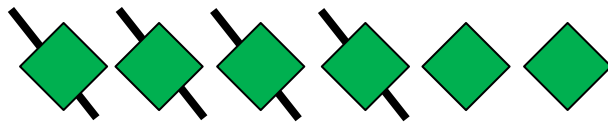


$$9 - 3 = \underline{\quad}$$

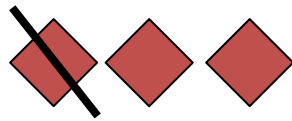


$$5 - 0 = \underline{\quad}$$

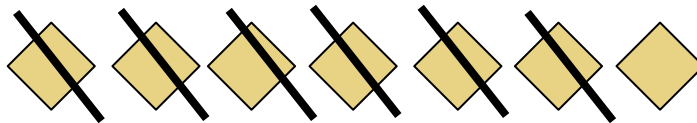
Answers




$$6 - 4 = 2$$



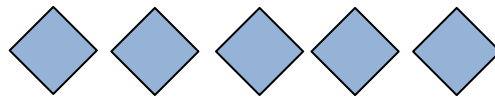
$$3 - 1 = 2$$



$$7 - 6 = 1$$



$$9 - 3 = 6$$



$$5 - 0 = 5$$

