




## Subtracting objects up to 10

### Kindergarten Subtraction Worksheet


Circle the objects being taken away. How many are left?


1. 
$$\begin{array}{r} 7 \\ - 4 \\ \hline 3 \end{array}$$


2. 
$$\begin{array}{r} 6 \\ - 2 \\ \hline \end{array}$$


3. 
$$\begin{array}{r} 8 \\ - 0 \\ \hline \end{array}$$


4. 
$$\begin{array}{r} 5 \\ - 2 \\ \hline \end{array}$$


5. 
$$\begin{array}{r} 4 \\ - 1 \\ \hline \end{array}$$


6. 
$$\begin{array}{r} 7 \\ - 6 \\ \hline \end{array}$$


7. 
$$\begin{array}{r} 2 \\ - 2 \\ \hline \end{array}$$


8. 
$$\begin{array}{r} 4 \\ - 3 \\ \hline \end{array}$$


## Answers

1. 3

2. 4

3. 8

4. 3

5. 3

6. 1

7. 0

8. 1