

Chemistry, The Central Science, 11th edition
Theodore L. Brown, H. Eugene LeMay, Jr.,
and Bruce E. Bursten

Chapter 3

Stoichiometry: Calculations with Chemical Formulas and Equations

John D. Bookstaver
St. Charles Community College
Cottleville, MO



Law of Conservation of Mass

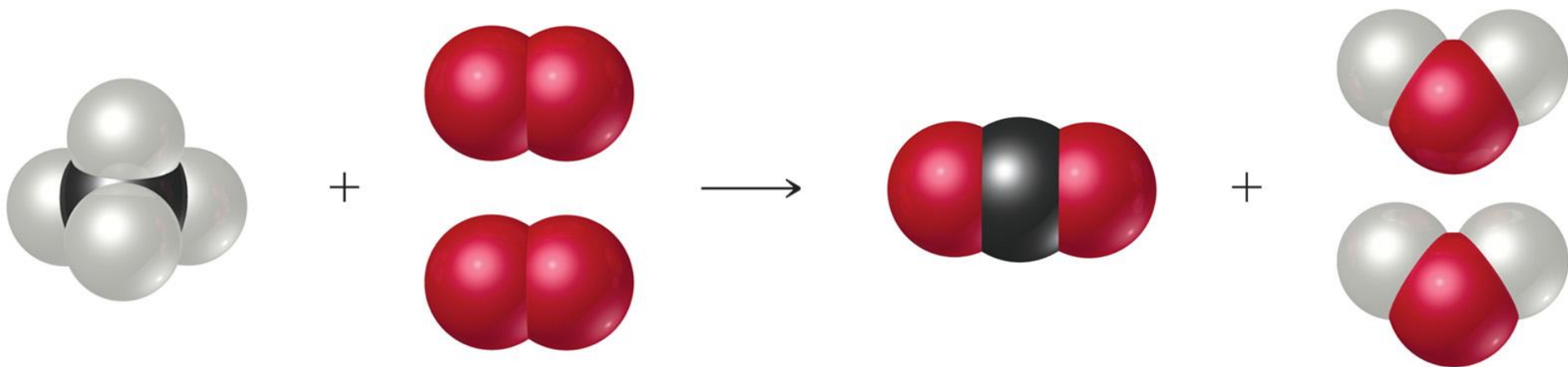
“We may lay it down as an incontestable axiom that, in all the operations of art and nature, nothing is created; an equal amount of matter exists both before and after the experiment. Upon this principle, the whole art of performing chemical experiments depends.”

--Antoine Lavoisier, 1789

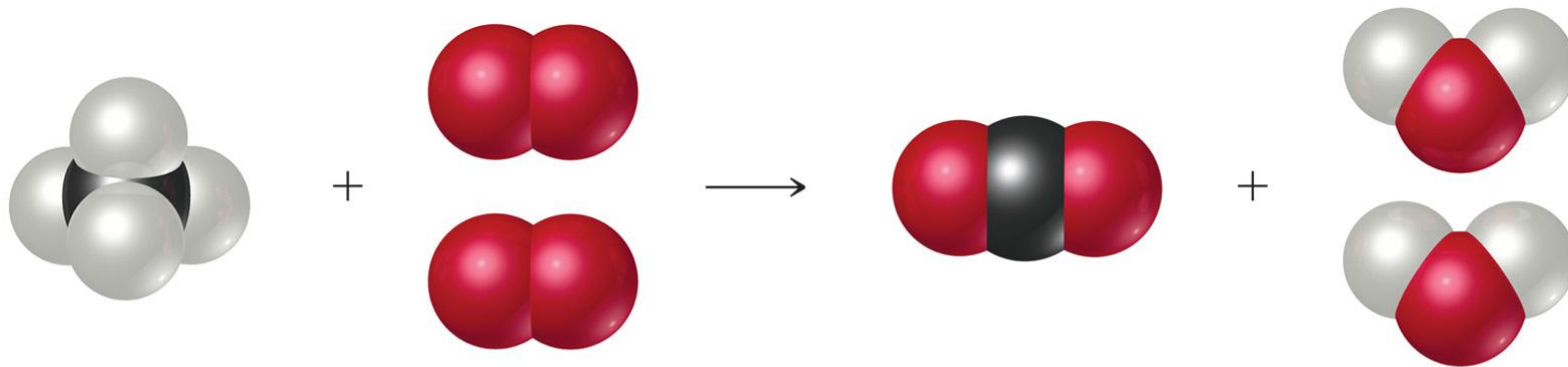


Chemical Equations

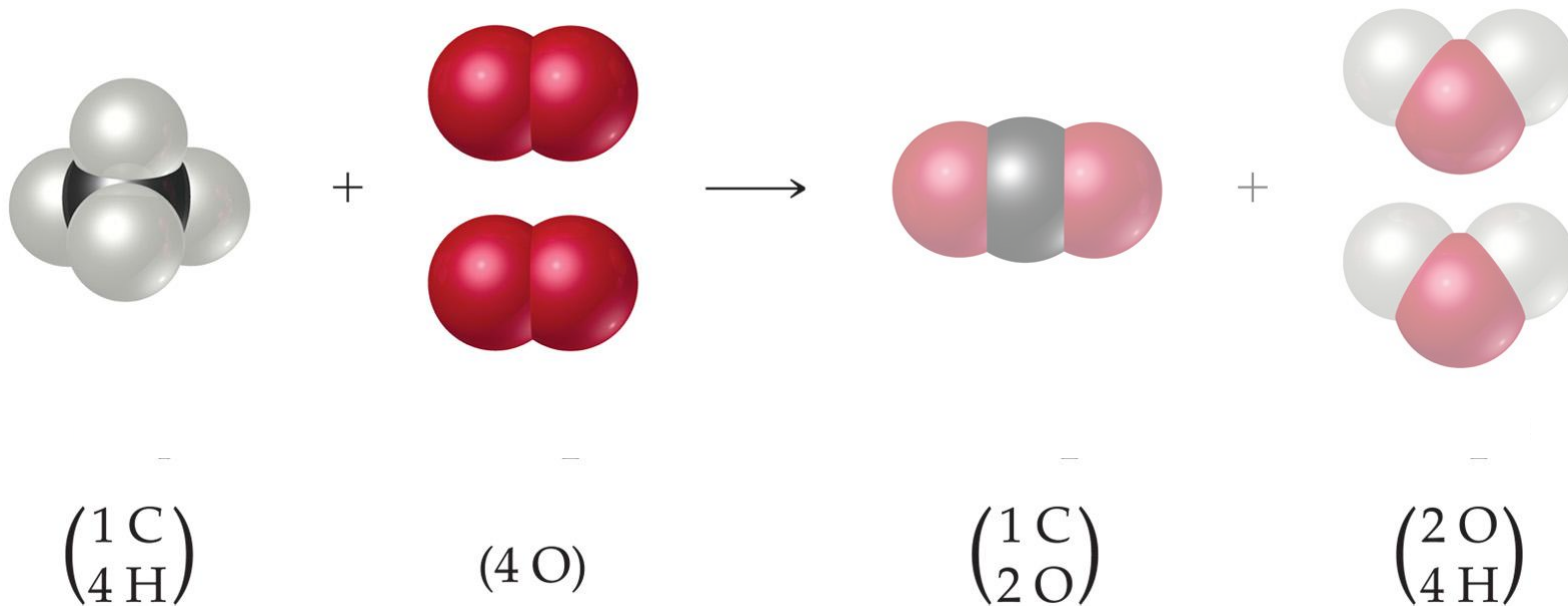
Chemical equations are concise representations of chemical reactions.



Anatomy of a Chemical Equation

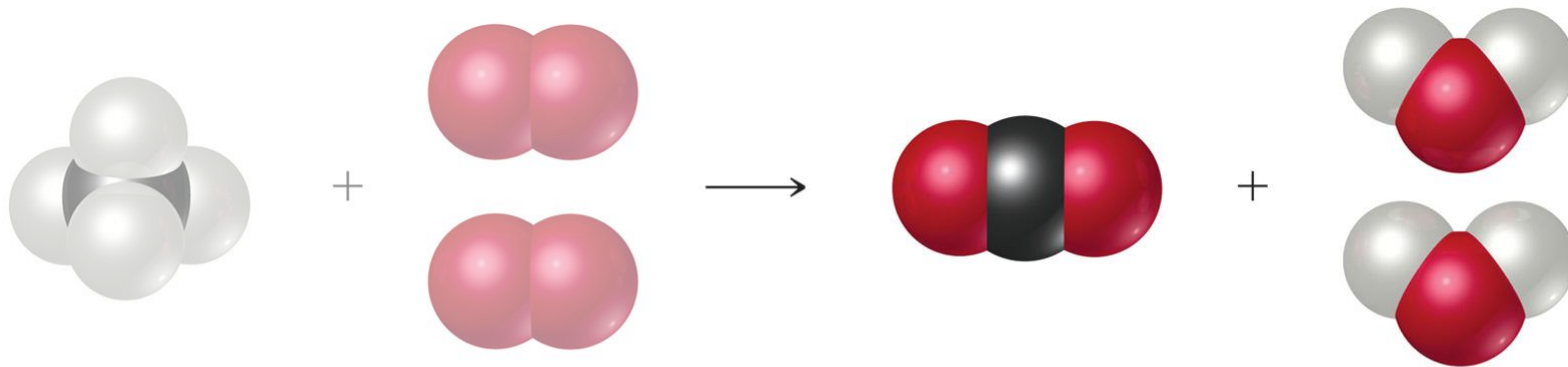

$$\begin{pmatrix} 1 \text{ C} \\ 4 \text{ H} \end{pmatrix}$$
$$(4 \text{ O})$$
$$\begin{pmatrix} 1 \text{ C} \\ 2 \text{ O} \end{pmatrix}$$
$$\begin{pmatrix} 2 \text{ O} \\ 4 \text{ H} \end{pmatrix}$$

Anatomy of a Chemical Equation



Reactants appear on the left side of the equation.

Anatomy of a Chemical Equation



$\begin{pmatrix} 1 \text{ C} \\ 4 \text{ H} \end{pmatrix}$

(4 O)

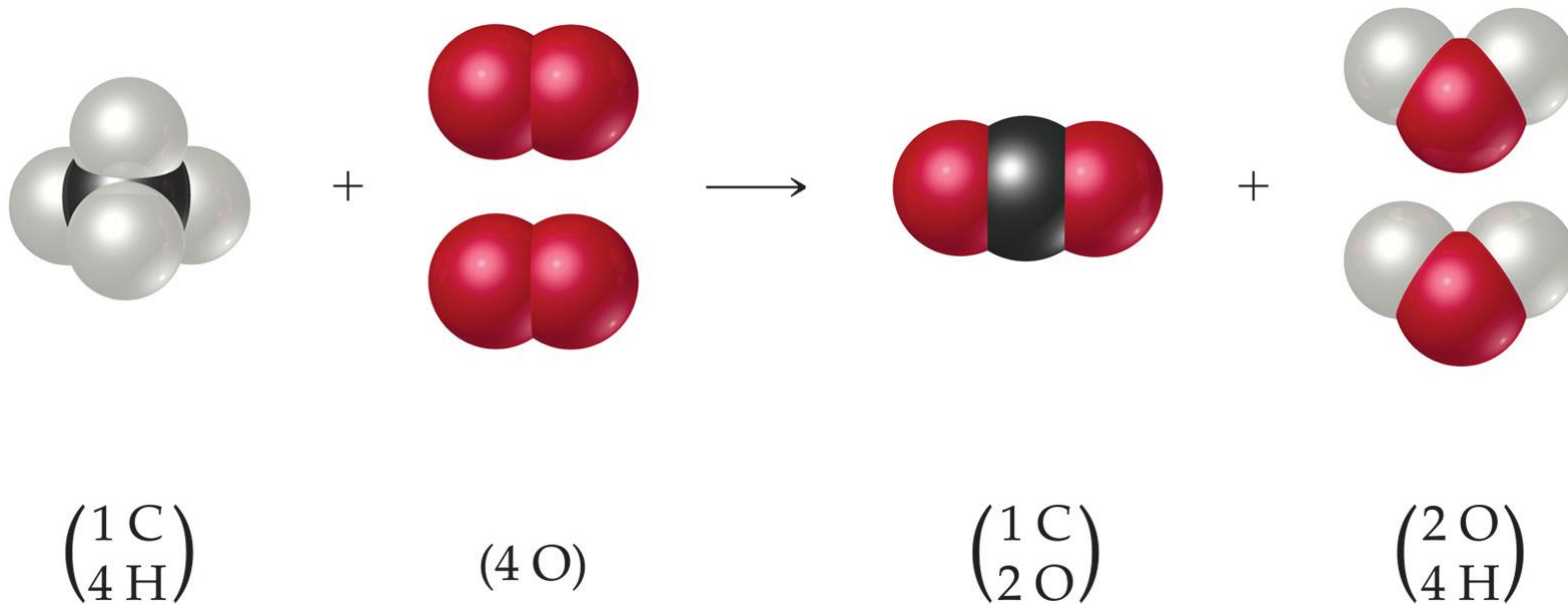
$\begin{pmatrix} 1 \text{ C} \\ 2 \text{ O} \end{pmatrix}$

$\begin{pmatrix} 2 \text{ O} \\ 4 \text{ H} \end{pmatrix}$

Products appear on the right side of the equation.

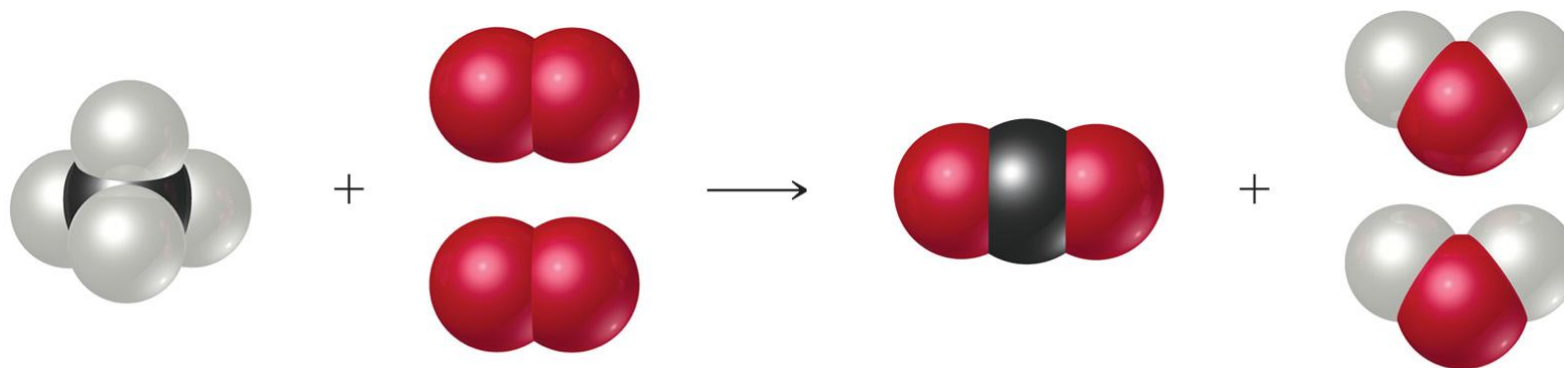


Anatomy of a Chemical Equation



The **states** of the reactants and products are written in parentheses to the right of each compound.

Anatomy of a Chemical Equation



Coefficients are inserted
to balance the equation.



Subscripts and Coefficients Give Different Information

Chemical symbol	Meaning	Composition
H_2O	One molecule of water:	Two H atoms and one O atom
$2 \text{H}_2\text{O}$	Two molecules of water:	Four H atoms and two O atoms

- Subscripts tell the number of atoms of each element in a molecule.

Subscripts and Coefficients Give Different Information

Chemical symbol	Meaning	Composition
H_2O	One molecule of water:	Two H atoms and one O atom
$2 \text{H}_2\text{O}$	Two molecules of water:	Four H atoms and two O atoms

- Subscripts tell the number of atoms of each element in a molecule
- Coefficients tell the number of molecules.

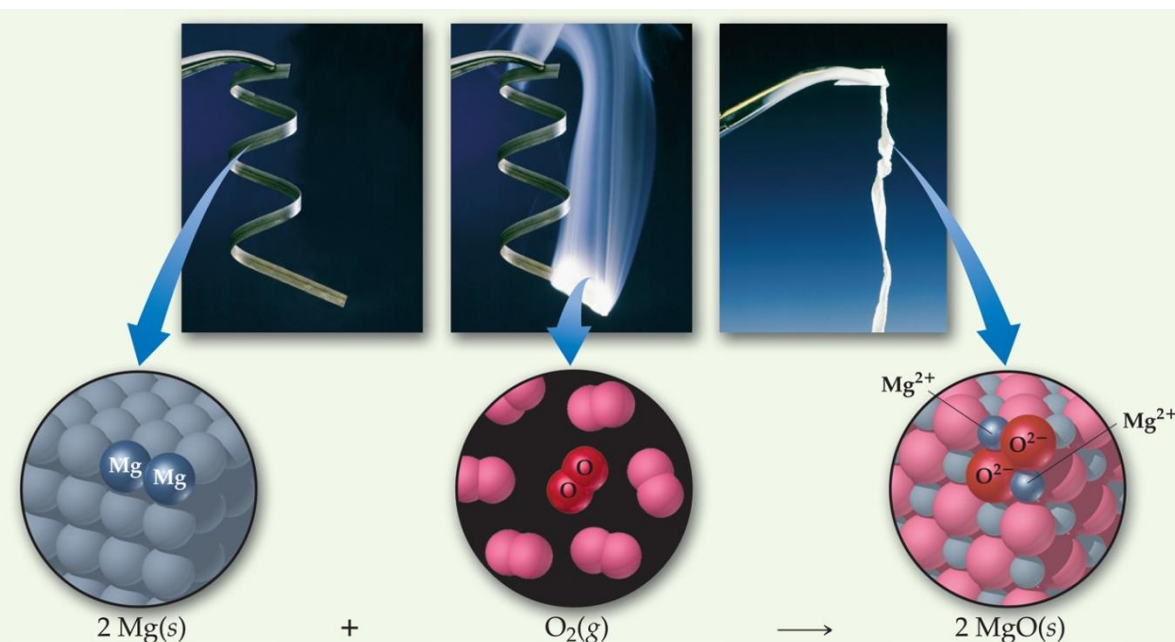


Reaction Types

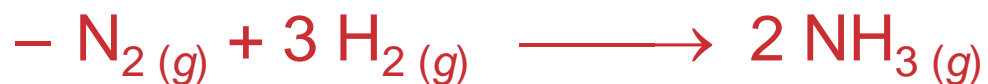


Combination Reactions

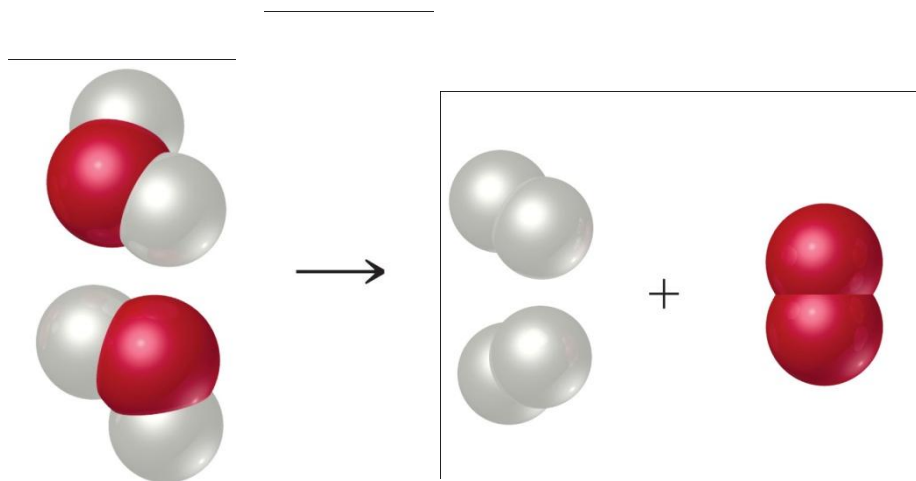
- In this type of reaction two or more substances react to form one product.



- **Examples:**



Decomposition Reactions

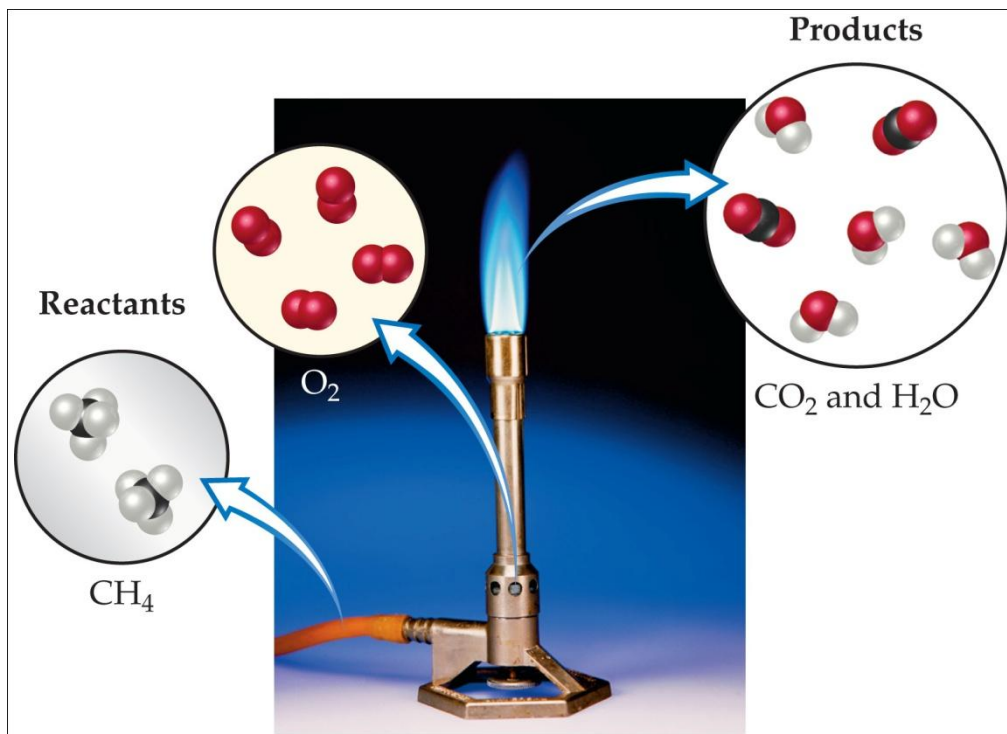


- In a decomposition one substance breaks down into two or more substances.

- Examples:



Combustion Reactions



- These are generally rapid reactions that produce a flame.
- Most often involve hydrocarbons reacting with oxygen in the air.

- Examples:



Formula Weights



Formula Weight (FW)

- A formula weight is the sum of the atomic weights for the atoms in a chemical formula.
- So, the formula weight of calcium chloride, CaCl_2 , would be

$$\begin{array}{r} \text{Ca: } 1(40.1 \text{ amu}) \\ + \text{Cl: } \underline{2(35.5 \text{ amu})} \\ \hline 111.1 \text{ amu} \end{array}$$

- Formula weights are generally reported for ionic compounds.



Molecular Weight (MW)

- A molecular weight is the sum of the atomic weights of the atoms in a molecule.
- For the molecule ethane, C_2H_6 , the molecular weight would be

$$\begin{array}{r} \text{C: } 2(12.0 \text{ amu}) \\ + \text{H: } 6(1.0 \text{ amu}) \\ \hline 30.0 \text{ amu} \end{array}$$



Percent Composition

One can find the percentage of the mass of a compound that comes from each of the elements in the compound by using this equation:

$$\% \text{ element} = \frac{(\text{number of atoms})(\text{atomic weight})}{(\text{FW of the compound})} \times 100$$



Percent Composition

So the percentage of carbon in ethane is...

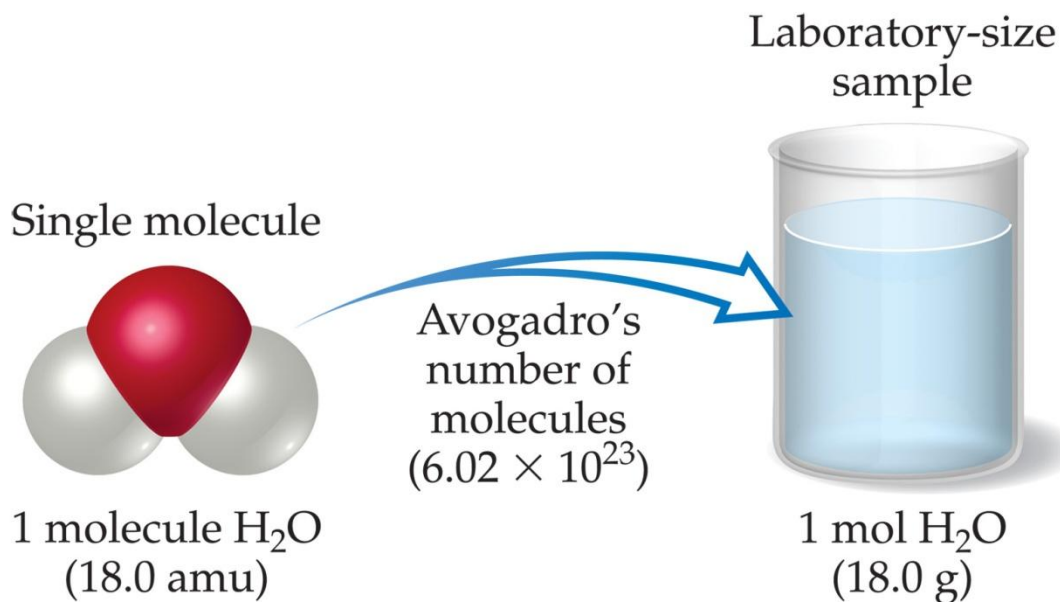
$$\begin{aligned}\%C &= \frac{(2)(12.0 \text{ amu})}{(30.0 \text{ amu})} \\ &= \frac{24.0 \text{ amu}}{30.0 \text{ amu}} \times 100 \\ &= 80.0\%\end{aligned}$$



Moles



Avogadro's Number



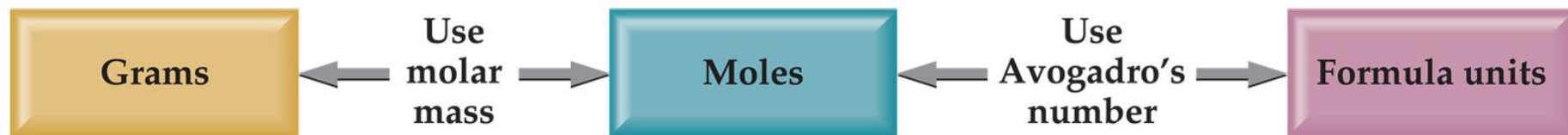
- 6.02×10^{23}
- 1 mole of ^{12}C has a mass of 12 g.

Molar Mass

- By definition, a molar mass is the mass of 1 mol of a substance (i.e., g/mol).
 - The molar mass of an element is the mass number for the element that we find on the periodic table.
 - The formula weight (in amu's) will be the same number as the molar mass (in g/mol).



Using Moles



Moles provide a bridge from the molecular scale to the real-world scale.



Mole Relationships

Name of Substance	Formula	Formula Weight (amu)	Molar Mass (g/mol)	Number and Kind of Particles in One Mole
Atomic nitrogen	N	14.0	14.0	6.02×10^{23} N atoms
Molecular nitrogen	N ₂	28.0	28.0	{ 6.02×10^{23} N ₂ molecules $2(6.02 \times 10^{23})$ N atoms
Silver	Ag	107.9	107.9	6.02×10^{23} Ag atoms
Silver ions	Ag ⁺	107.9 ^a	107.9	6.02×10^{23} Ag ⁺ ions
Barium chloride	BaCl ₂	208.2	208.2	{ 6.02×10^{23} BaCl ₂ units 6.02×10^{23} Ba ²⁺ ions $2(6.02 \times 10^{23})$ Cl ⁻ ions

^aRecall that the electron has negligible mass; thus, ions and atoms have essentially the same mass.

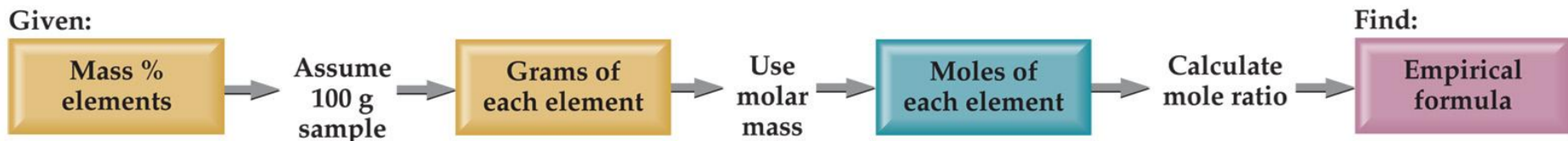
- One mole of atoms, ions, or molecules contains Avogadro's number of those particles.
- One mole of molecules or formula units contains Avogadro's number times the number of atoms or ions of each element in the compound.



Finding Empirical Formulas



Calculating Empirical Formulas



One can calculate the empirical formula from the percent composition.



Calculating Empirical Formulas

The compound *para*-aminobenzoic acid (you may have seen it listed as PABA on your bottle of sunscreen) is composed of carbon (61.31%), hydrogen (5.14%), nitrogen (10.21%), and oxygen (23.33%). Find the empirical formula of PABA.



Calculating Empirical Formulas

Assuming 100.00 g of *para*-aminobenzoic acid,

$$\text{C:} \quad 61.31 \text{ g} \times \frac{1 \text{ mol}}{12.01 \text{ g}} = 5.105 \text{ mol C}$$

$$\text{H:} \quad 5.14 \text{ g} \times \frac{1 \text{ mol}}{1.01 \text{ g}} = 5.09 \text{ mol H}$$

$$\text{N:} \quad 10.21 \text{ g} \times \frac{1 \text{ mol}}{14.01 \text{ g}} = 0.7288 \text{ mol N}$$

$$\text{O:} \quad 23.33 \text{ g} \times \frac{1 \text{ mol}}{16.00 \text{ g}} = 1.456 \text{ mol O}$$



Calculating Empirical Formulas

Calculate the mole ratio by dividing by the smallest number of moles:

$$\text{C: } \frac{5.105 \text{ mol}}{0.7288 \text{ mol}} = 7.005 \approx 7$$

$$\text{H: } \frac{5.09 \text{ mol}}{0.7288 \text{ mol}} = 6.984 \approx 7$$

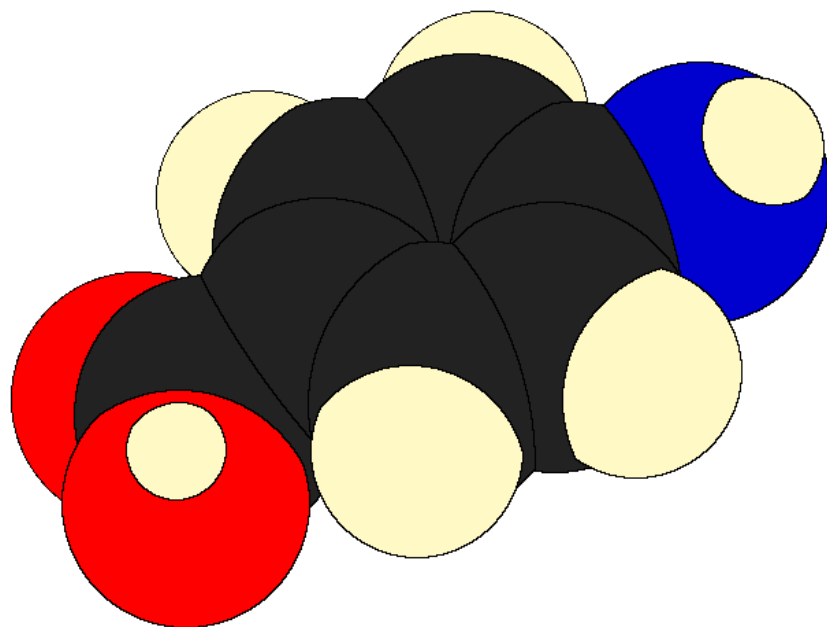
$$\text{N: } \frac{0.7288 \text{ mol}}{0.7288 \text{ mol}} = 1.000$$

$$\text{O: } \frac{1.458 \text{ mol}}{0.7288 \text{ mol}} = 2.001 \approx 2$$

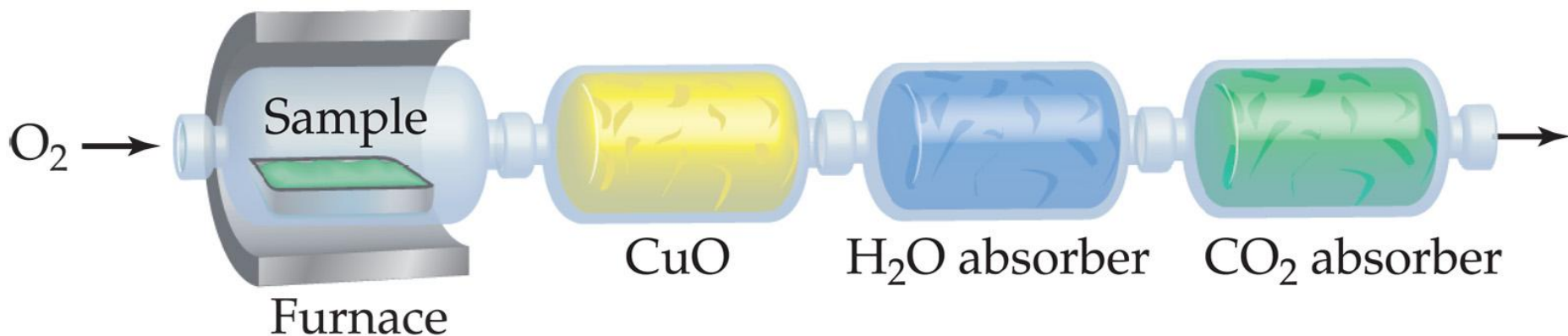


Calculating Empirical Formulas

These are the subscripts for the empirical formula:

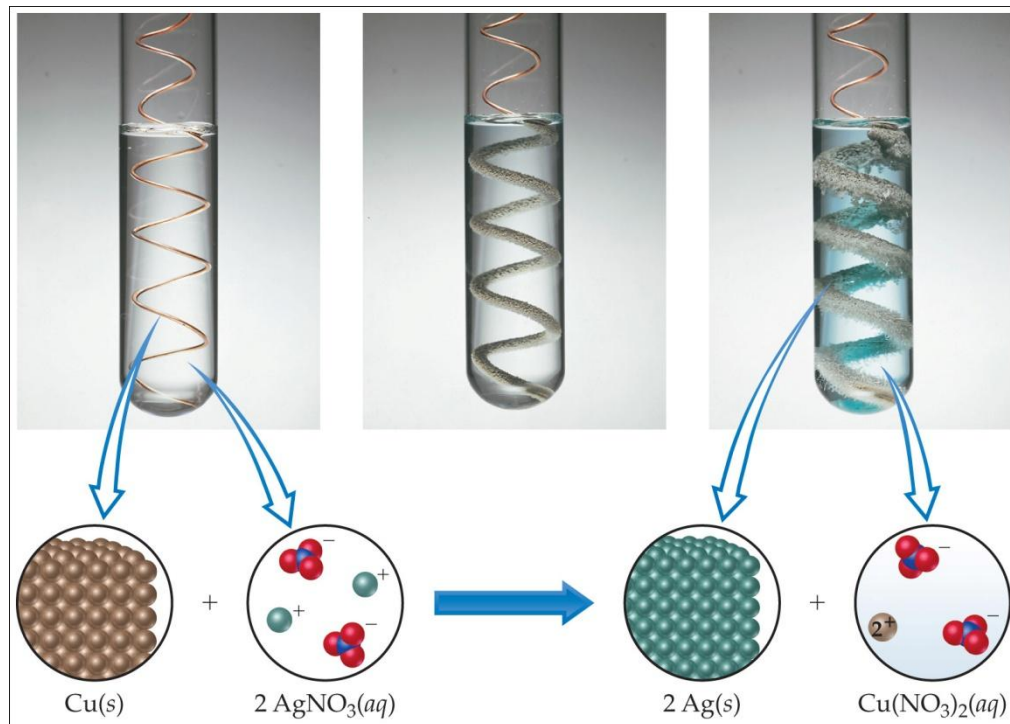


Combustion Analysis






- Compounds containing C, H and O are routinely analyzed through combustion in a chamber like this.
 - C is determined from the mass of CO₂ produced.
 - H is determined from the mass of H₂O produced.
 - O is determined by difference after the C and H have been determined.

Elemental Analyses



Compounds containing other elements are analyzed using methods analogous to those used for C, H and O.

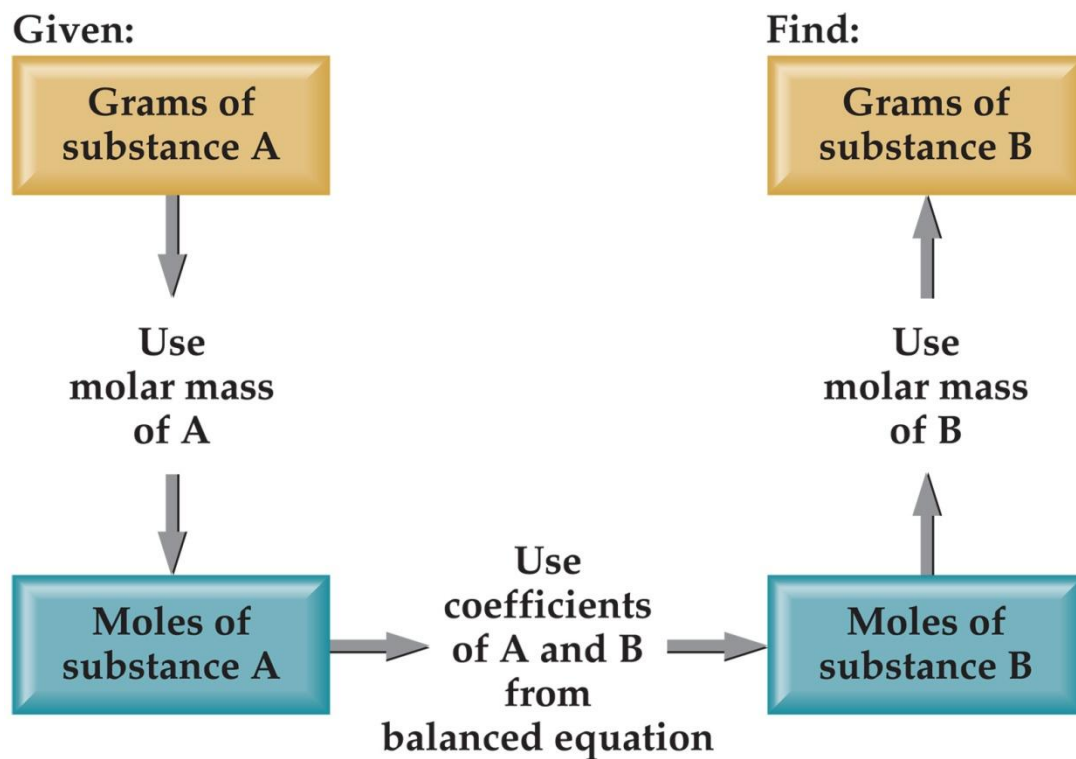
Stoichiometric Calculations

Equation:	$2 \text{H}_2(\text{g})$	+	$\text{O}_2(\text{g})$	\longrightarrow	$2 \text{H}_2\text{O}(\text{l})$
Molecules:	2 molecules H_2	+	1 molecule O_2	\longrightarrow	2 molecules H_2O
					
Mass (amu):	4.0 amu H_2	+	32.0 amu O_2	\longrightarrow	36.0 amu H_2O
Amount (mol):	2 mol H_2	+	1 mol O_2	\longrightarrow	2 mol H_2O
Mass (g):	4.0 g H_2	+	32.0 g O_2	\longrightarrow	36.0 g H_2O

The coefficients in the balanced equation give the ratio of *moles* of reactants and products.

Stoichiometric Calculations

Starting with the mass of Substance A you can use the ratio of the coefficients of A and B to calculate the mass of Substance B formed (if it's a product) or used (if it's a reactant).



Stoichiometric Calculations



1.00 g $\text{C}_6\text{H}_{12}\text{O}_6$

Starting with 1.00 g of $\text{C}_6\text{H}_{12}\text{O}_6$...
we calculate the moles of $\text{C}_6\text{H}_{12}\text{O}_6$...
use the coefficients to find the moles of H_2O ...
and then turn the moles of water to grams.



Limiting Reactants



How Many Cookies Can I Make?



- You can make cookies until you run out of one of the ingredients.
- Once this family runs out of sugar, they will stop making cookies (at least any cookies you would want to eat).

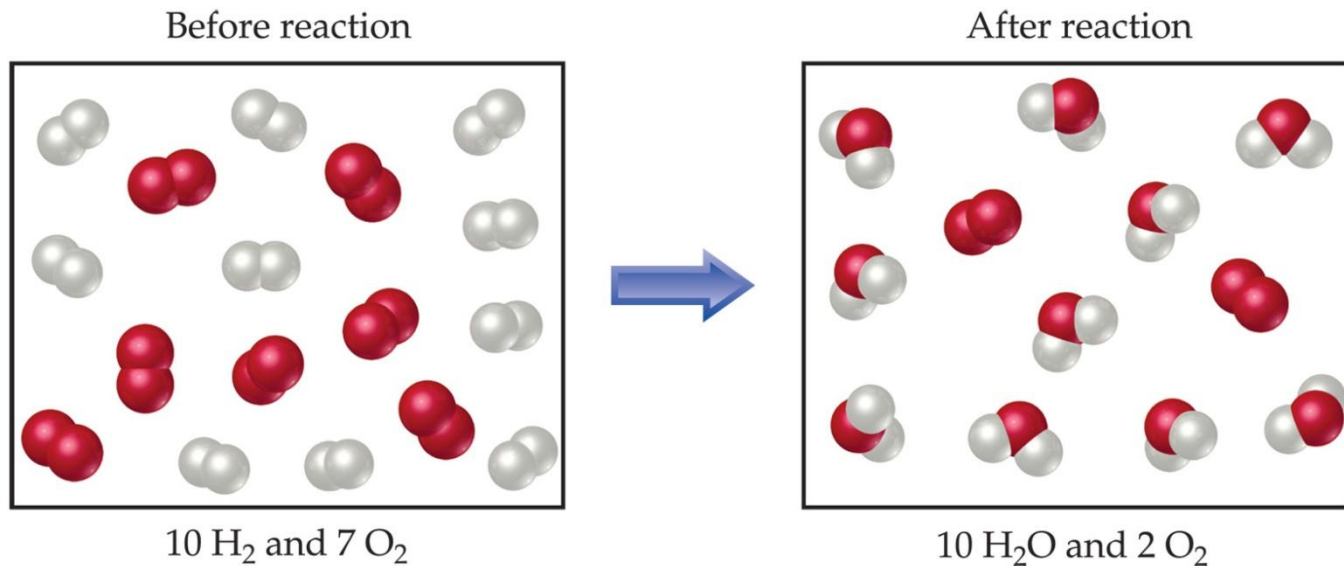
How Many Cookies Can I Make?



- In this example the sugar would be the limiting reactant, because it will limit the amount of cookies you can make.

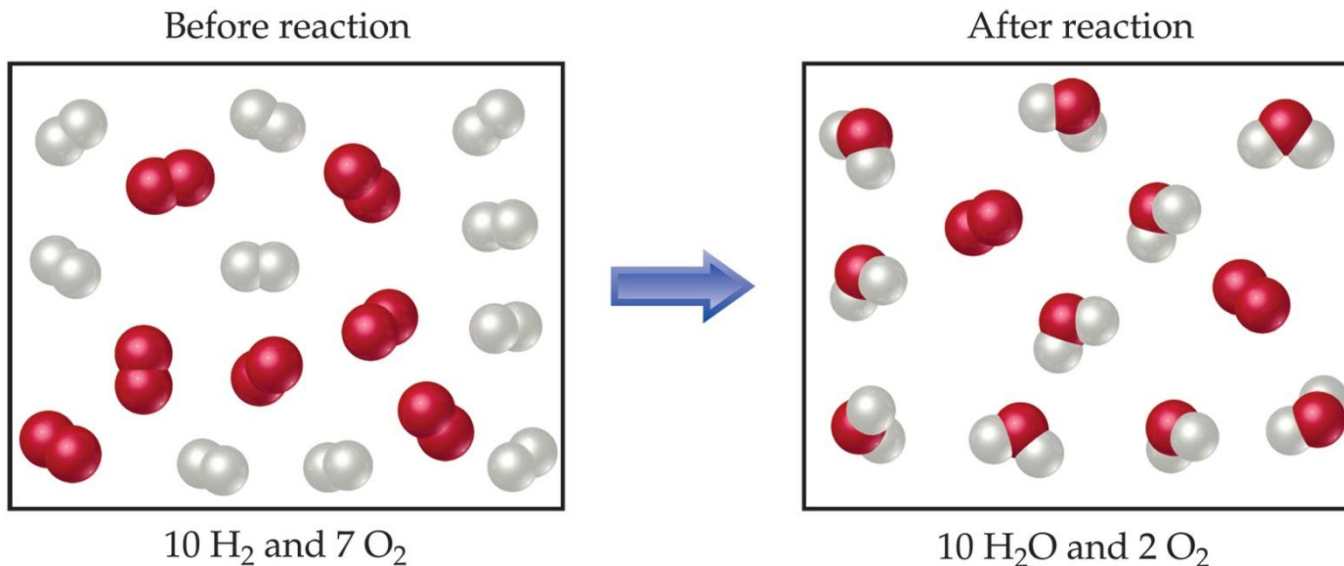
Limiting Reactants

- The limiting reactant is the reactant present in the smallest stoichiometric amount.
 - In other words, it's the reactant you'll run out of first (in this case, the H_2).



Limiting Reactants

In the example below, the O_2 would be the excess reagent.



Theoretical Yield

- The theoretical yield is the maximum amount of product that can be made.
 - In other words it's the amount of product possible as calculated through the stoichiometry problem.
- This is different from the actual yield, which is the amount one actually produces and measures.




Percent Yield

One finds the percent yield by comparing the amount actually obtained (actual yield) to the amount it was possible to make (theoretical yield).

$$\text{Percent Yield} = \frac{\text{Actual Yield}}{\text{Theoretical Yield}} \times 100$$



 How many oxygen atoms are present
in $\text{MgSO}_4 \cdot 7 \text{H}_2\text{O}$?

- 4 oxygen atoms
- 5 oxygen atoms
- 7 oxygen atoms
- 11 oxygen atoms
- 18 oxygen atoms

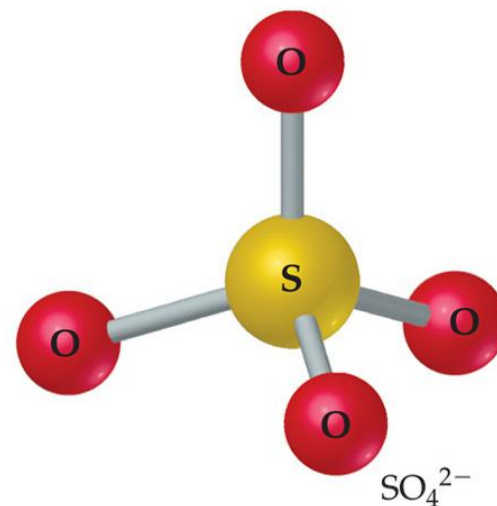
How many oxygen atoms are present
in $\text{MgSO}_4 \cdot 7 \text{H}_2\text{O}$?

- 4 oxygen atoms
- 5 oxygen atoms
- 7 oxygen atoms
- 11 oxygen atoms
- 18 oxygen atoms



How many sulfur atoms are present in 1.0 mole of $\text{Al}_2(\text{SO}_4)_3$?

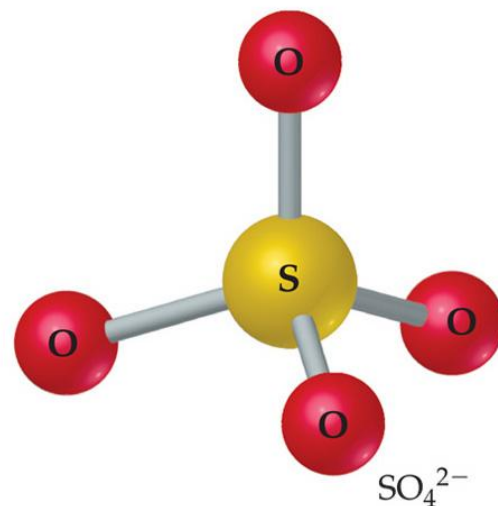
- 1 sulfur atom
- 3 sulfur atoms
- 4 sulfur atoms
- 6.0×10^{23} sulfur atoms
- 1.8×10^{24} sulfur atoms



Copyright © 2006 Pearson Prentice Hall, Inc.

How many sulfur atoms are present
in 1.0 mole of $\text{Al}_2(\text{SO}_4)_3$?

- 1 sulfur atom
- 3 sulfur atoms
- 4 sulfur atoms
- 6.0×10^{23} sulfur atom
- 1.8×10^{24} sulfur atom




Copyright © 2006 Pearson Prentice Hall, Inc.

If you have equal masses of the following metals, which will have the most number of atoms?



1. lithium
2. sodium
3. potassium
4. rubidium
5. calcium



Copyright © 2006 Pearson Prentice Hall, Inc.

An alkali metal



Copyright © 2006 Pearson Prentice Hall, Inc.

Ca in H₂O

If you have equal masses of the following metals,
which will have the most number of atoms?

1. lithium
2. sodium
3. potassium
4. rubidium
5. calcium



Copyright © 2006 Pearson Prentice Hall, Inc.

An alkali metal

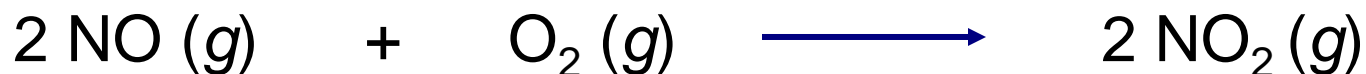


Copyright © 2006 Pearson Prentice Hall, Inc.

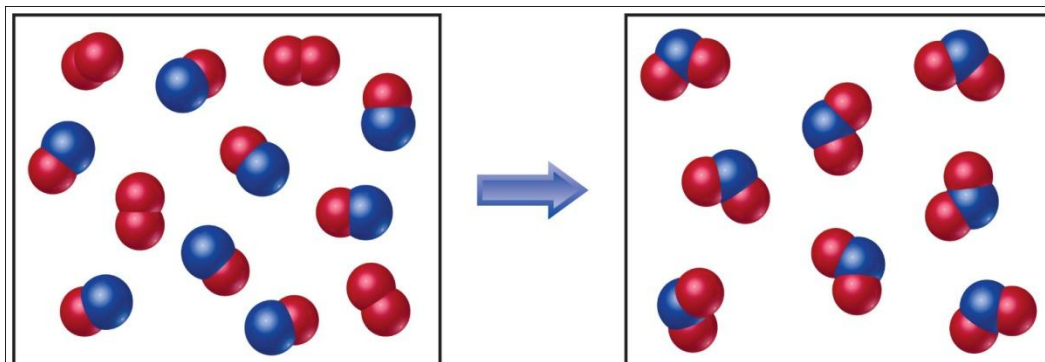
Ca in H₂O



How many moles of oxygen gas are required to react completely with 1.0 mole NO?

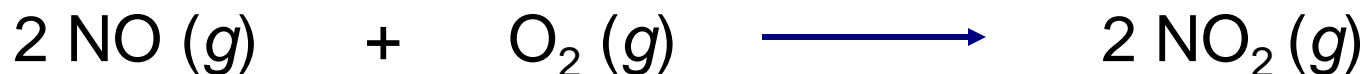


1. 0.5 mol O_2
2. 1.0 mol O_2
3. 1.5 mol O_2
4. 2.0 mol O_2
5. 2.5 mol O_2

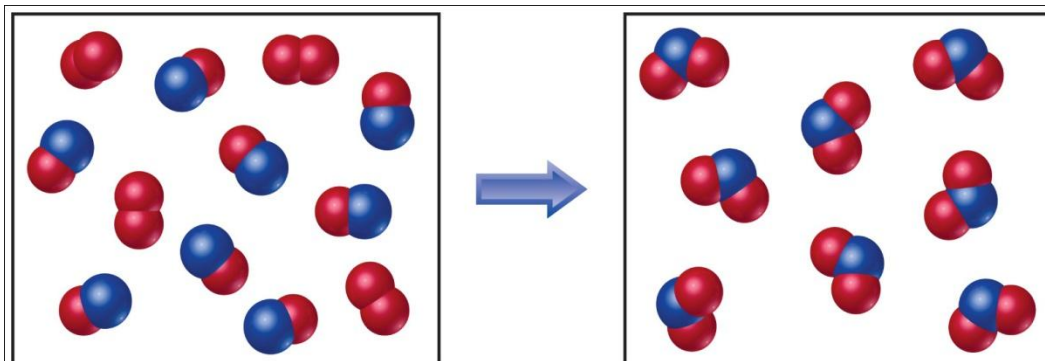


Copyright © 2009 Pearson Prentice Hall, Inc.

How many moles of oxygen gas are required to react completely with 1.0 mole NO?



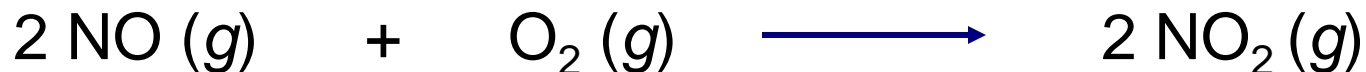
1. 0.5 mol O_2
2. 1.0 mol O_2
3. 1.5 mol O_2
4. 2.0 mol O_2
5. 2.5 mol O_2



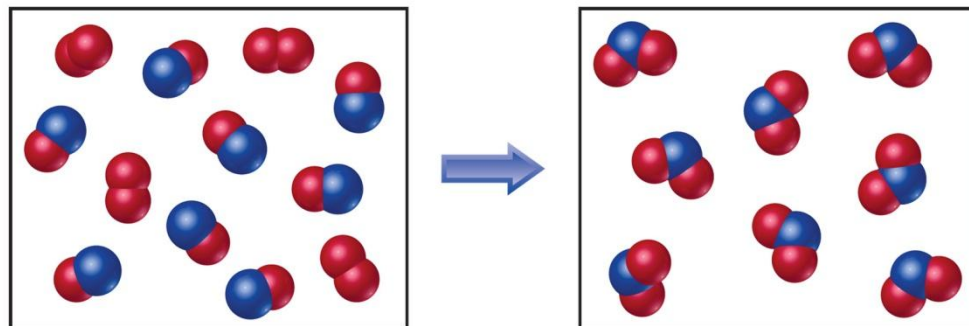
Copyright © 2009 Pearson Prentice Hall, Inc.



If 10.0 moles of NO are reacted with 6.0 moles O₂, how many moles NO₂ are produced?



1. 2.0 mol NO₂
2. 6.0 mol NO₂
3. 10.0 mol NO₂
4. 16.0 mol NO₂
5. 32.0 mol NO₂

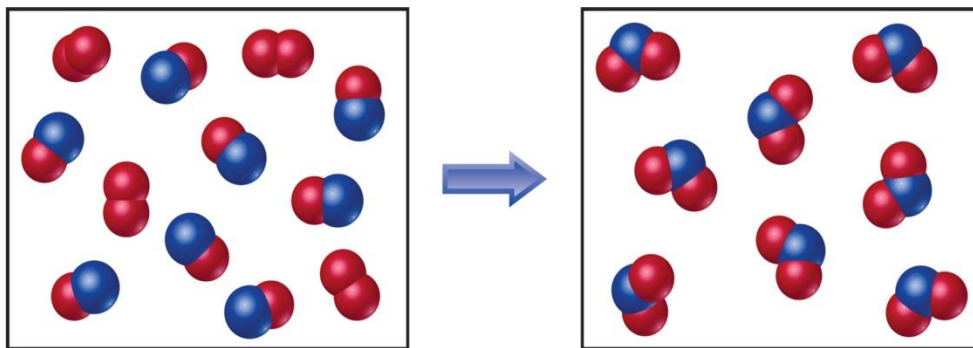


Copyright © 2006 Pearson Prentice Hall, Inc.

If 10.0 moles of NO are reacted with 6.0 moles O₂, how many moles NO₂ are produced?



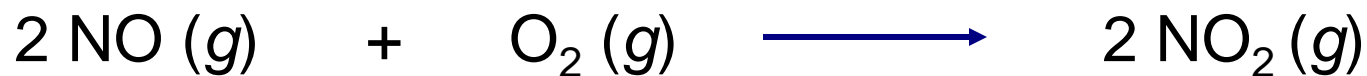
1. 2.0 mol NO₂
2. 6.0 mol NO₂
3. 10.0 mol NO₂
4. 16.0 mol NO₂
5. 32.0 mol NO₂



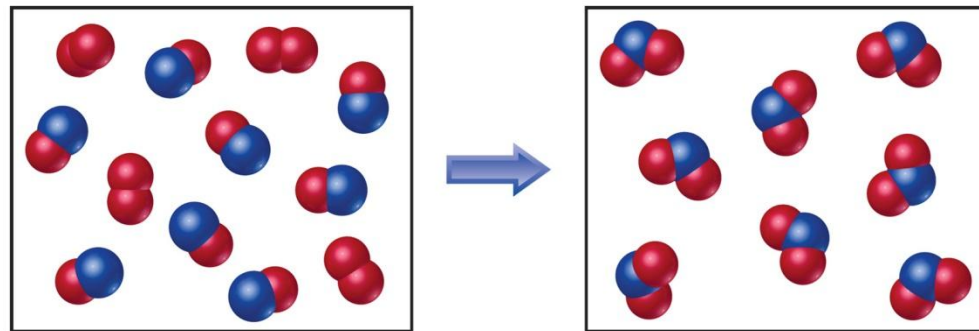
Copyright © 2006 Pearson Prentice Hall, Inc.



If 10.0 moles of CO are reacted with 6.0 moles O₂, how many moles of the excess reagent remain?

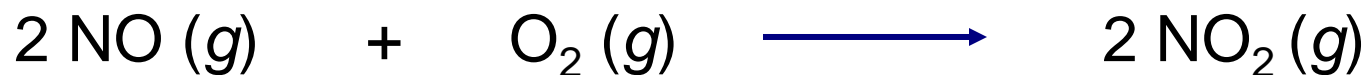


1. 1.0 mol O₂
2. 5.0 mol O₂
3. 4.0 mol NO
4. 8.0 mol NO
5. None of the above

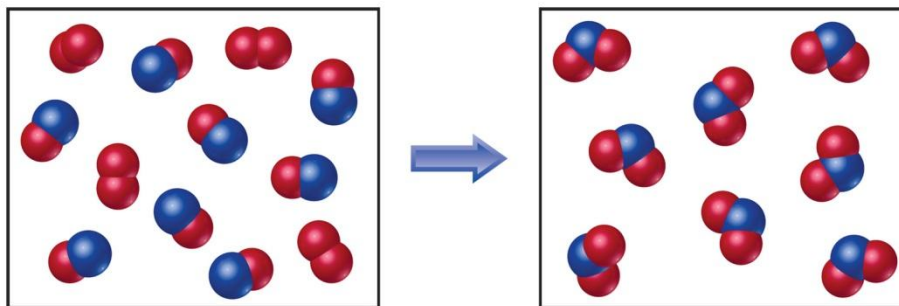


Copyright © 2006 Pearson Prentice Hall, Inc.

If 10.0 moles of CO are reacted with 6.0 moles O₂,
how many moles of the excess reagent remain?



1. 1.0 mol O₂
2. 5.0 mol O₂
3. 4.0 mol NO
4. 8.0 mol NO
5. None of the above



Copyright © 2006 Pearson Prentice Hall, Inc.

In a chemical equation, the substances to the left of the arrow are called the:

- a. yields.
- b. reactants.
- c. products.
- d. coefficients.

In a chemical equation, the substances to the left of the arrow are called the:

- a. yields.
- b. reactants.
- c. products.
- d. coefficients.

When hydrocarbons are burned in air, they form:

- a. water and carbon dioxide.
- b. charcoal.
- c. methane.
- d. oxygen and water.

When hydrocarbons are burned in air, they form:

- a. water and carbon dioxide.
- b. charcoal.
- c. methane.
- d. oxygen and water.

The formula weight of
 Na_3PO_4 is:

- a. 70 grams/mole
- b. 164 grams/mole
- c. 265 grams/mole
- d. 116 grams/mole

The formula weight of
 Na_3PO_4 is:

- a. 70 grams/mole
- b. 164 grams/mole
- c. 265 grams/mole
- d. 116 grams/mole

The percentage by mass of phosphorus in Na_3PO_4 is:

- a. 44.0%
- b. 11.7%
- c. 26.7%
- d. 18.9%

The percentage by mass of phosphorus in Na_3PO_4 is:

- a. 44.0%
- b. 11.7%
- c. 26.7%
- d. 18.9%

The formula weight of any substance is equal to:

- a. Avogadro's number.
- b. its atomic weight.
- c. its density.
- d. its molar mass.

The formula weight of any substance is equal to:

- a. Avogadro's number.
- b. its atomic weight.
- c. its density.
- d. its molar mass.

Ethyl alcohol contains 52.2% C, 13.0% H, and 34.8 % O by mass. What is the empirical formula of ethyl alcohol?

- a. $C_2H_5O_2$
- b. C_2H_6O
- c. $C_2H_6O_2$
- d. $C_3H_4O_2$

Ethyl alcohol contains 52.2% C, 13.0% H, and 34.8 % O by mass. What is the empirical formula of ethyl alcohol?

- a. $C_2H_5O_2$
- b. C_2H_6O
- c. $C_2H_6O_2$
- d. $C_3H_4O_2$

Methyl methacrylate has a molar mass of 100 g/mole. When a sample of methyl methacrylate weighing 3.14 mg was completely combusted, the only products formed were 6.91 mg of CO_2 and 2.26 mg of water. What is methyl methacrylate's molecular formula?



Methyl methacrylate has a molar mass of 100 g/mole. When a sample of methyl methacrylate weighing 3.14 mg was completely combusted, the only products formed were 6.91 mg of CO_2 and 2.26 mg of water. What is methyl methacrylate's molecular formula?





If 10.0 grams of iron and 20.0 grams of chlorine react as shown, what is the theoretical yield of ferric chloride?

- a. 10.0 grams
- b. 20.0 grams
- c. 29.0 grams
- d. 30.0 grams



If 10.0 grams of iron and 20.0 grams of chlorine react as shown, what is the theoretical yield of ferric chloride?

- a. 10.0 grams
- b. 20.0 grams
- c. 29.0 grams
- d. 30.0 grams



When 15.0 grams of each reactant were mixed together, the yield of $\text{C}_7\text{H}_{12}\text{O}_4$ was 15.0 grams. What was the percentage yield?

- a. 100.0%
- b. 75.0%
- c. 65.0%
- d. 50.0%



When 15.0 grams of each reactant were mixed together, the yield of $\text{C}_7\text{H}_{12}\text{O}_4$ was 15.0 grams. What was the percentage yield?

- a. 100.0%
- b. 75.0%
- c. 65.0%
- d. 50.0%

The percentage yield of a reaction is $(100.0\%)(X)$. Which of the following is X ?

- a. theoretical yield / actual yield
- b. calculated yield / actual yield
- c. calculated yield / theoretical yield
- d. actual yield / theoretical yield

The percentage yield of a reaction is $(100.0\%)(X)$. Which of the following is X ?

- a. theoretical yield / actual yield
- b. calculated yield / actual yield
- c. calculated yield / theoretical yield
- d. actual yield / theoretical yield