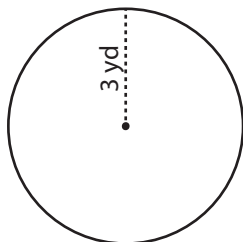


Radius & Diameter

Easy: S1

Find the radius and diameter of each circle.

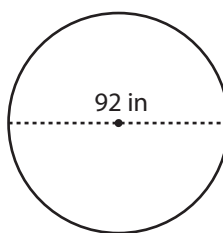
1)



Radius = _____

Diameter = _____

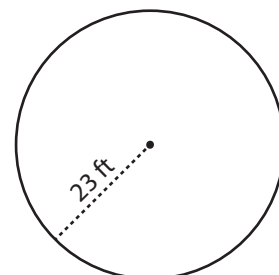
2)



Radius = _____

Diameter = _____

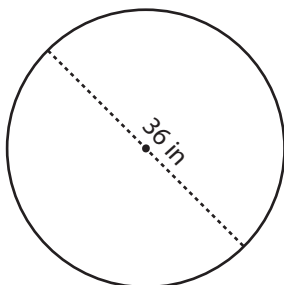
3)



Radius = _____

Diameter = _____

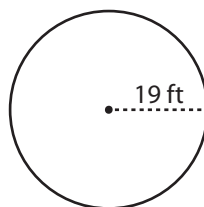
4)



Radius = _____

Diameter = _____

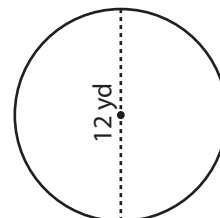
5)



Radius = _____

Diameter = _____

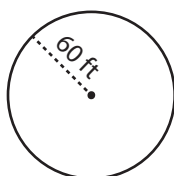
6)



Radius = _____

Diameter = _____

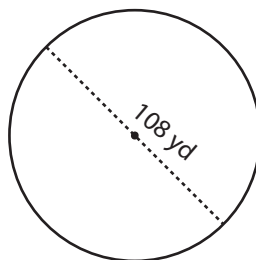
7)



Radius = _____

Diameter = _____

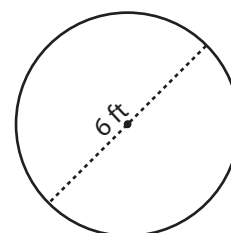
8)



Radius = _____

Diameter = _____

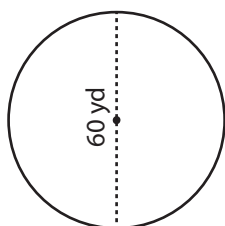
9)



Radius = _____

Diameter = _____

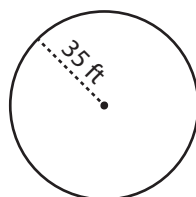
10)



Radius = _____

Diameter = _____

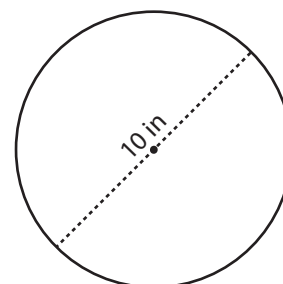
11)



Radius = _____

Diameter = _____

12)



Radius = _____

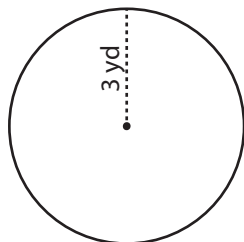
Diameter = _____

Radius & Diameter

Easy: S1

Find the radius and diameter of each circle.

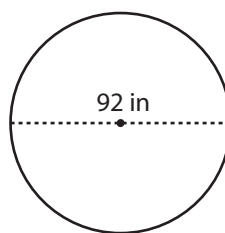
1)



Radius = 3 yd

Diameter = 6 yd

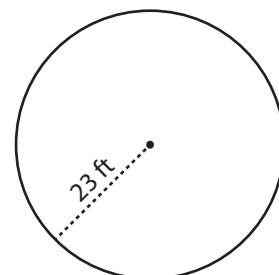
2)



Radius = 46 in

Diameter = 92 in

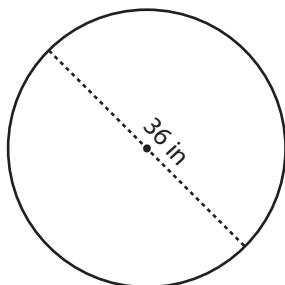
3)



Radius = 23 ft

Diameter = 46 ft

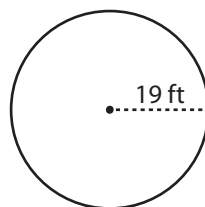
4)



Radius = 18 in

Diameter = 36 in

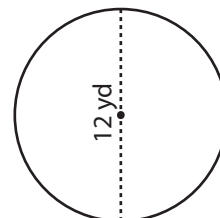
5)



Radius = 19 ft

Diameter = 38 ft

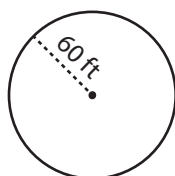
6)



Radius = 6 yd

Diameter = 12 yd

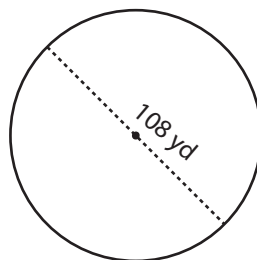
7)



Radius = 60 ft

Diameter = 120 ft

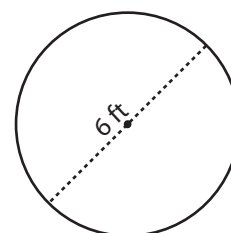
8)



Radius = 54 yd

Diameter = 108 yd

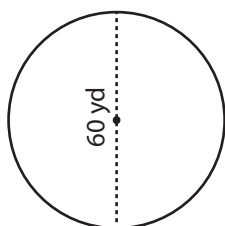
9)



Radius = 3 ft

Diameter = 6 ft

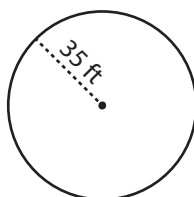
10)



Radius = 30 yd

Diameter = 60 yd

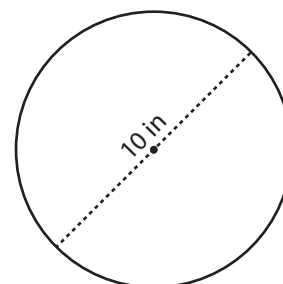
11)



Radius = 35 ft

Diameter = 70 ft

12)



Radius = 5 in

Diameter = 10 in