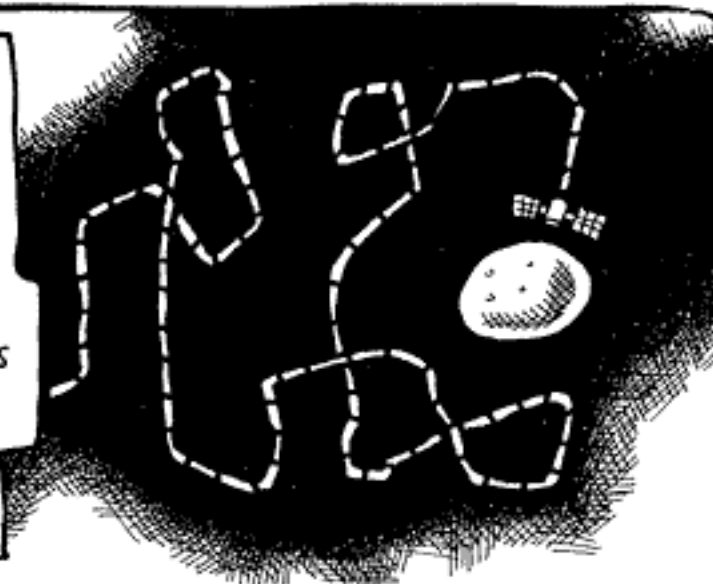


# *Standards for Measurement*

*Preparation for College Chemistry  
Columbia University  
Department of Chemistry*

TURN FOUR FURLONGS  
TO THE EAST, THEN  
TWO RODS TO THE RIGHT,  
SEVEN FATHOMS STRAIGHT  
AHEAD, A PECK TO THE  
SOUTH - NO, MAKE THAT A  
PENNYWEIGHT, THIRTEEN CUBITS  
SIDEWAYS, A HOGSHEAD  
DOWN TOWARD THE  
FINAL APPROACH TO THE  
MARTIAN SURFACE ...



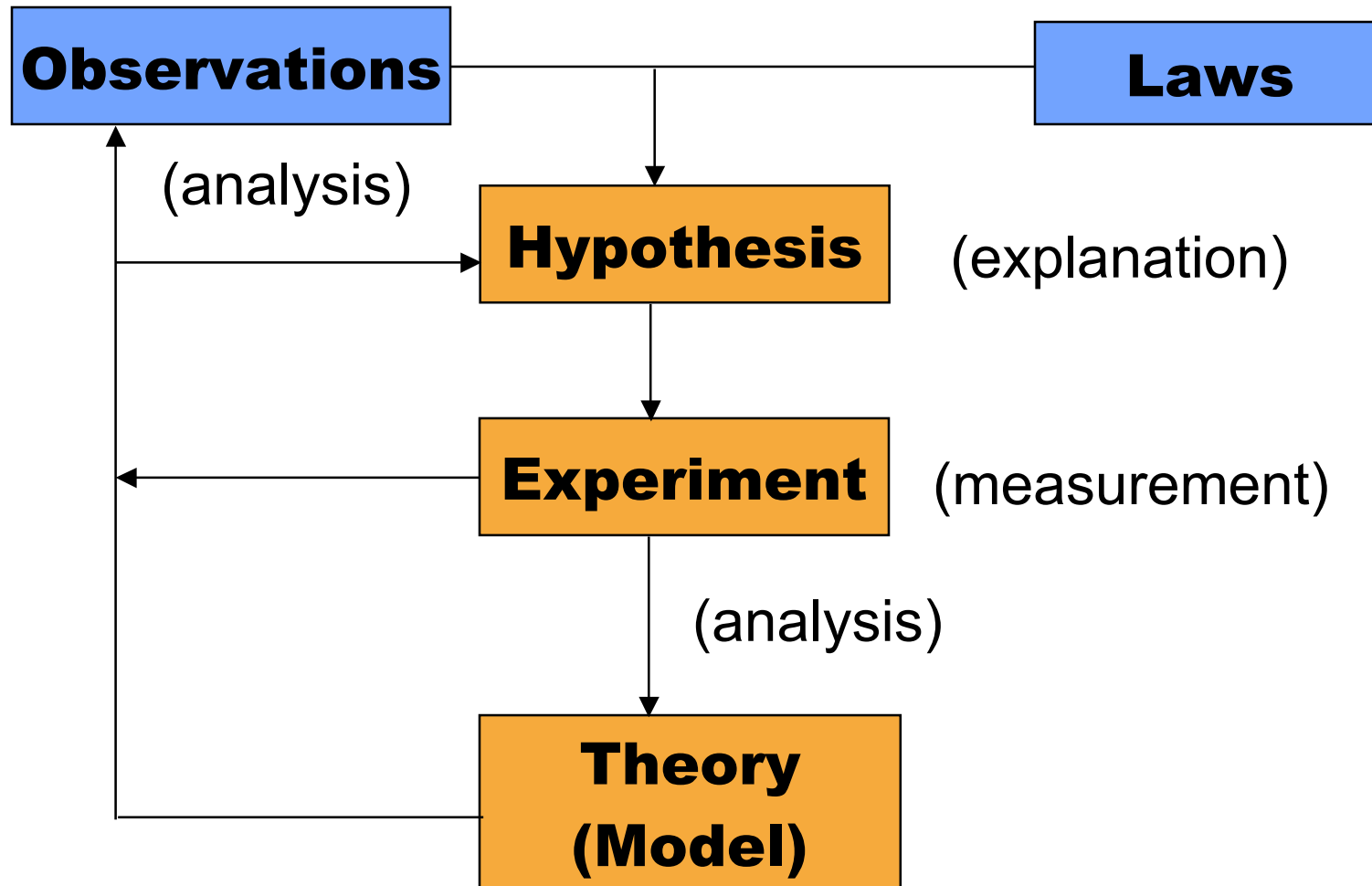
TOLES

UNIVERSAL PRESS SYND.  
© 1999 THE BUFFALO NEWS

WHAT'S A  
HOGSHEAD? / THE GUY WHO WROTE  
THESE INSTRUCTIONS

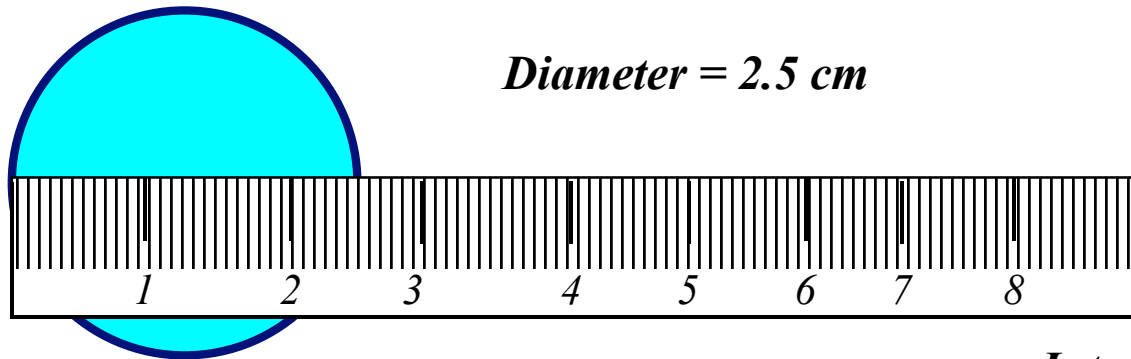
10/4/99

# *The Scientific Method*



# *Measurement and Interpretations*

*Direct Measurement*



*Diameter = 2.5 cm*

*Interpretation Step*

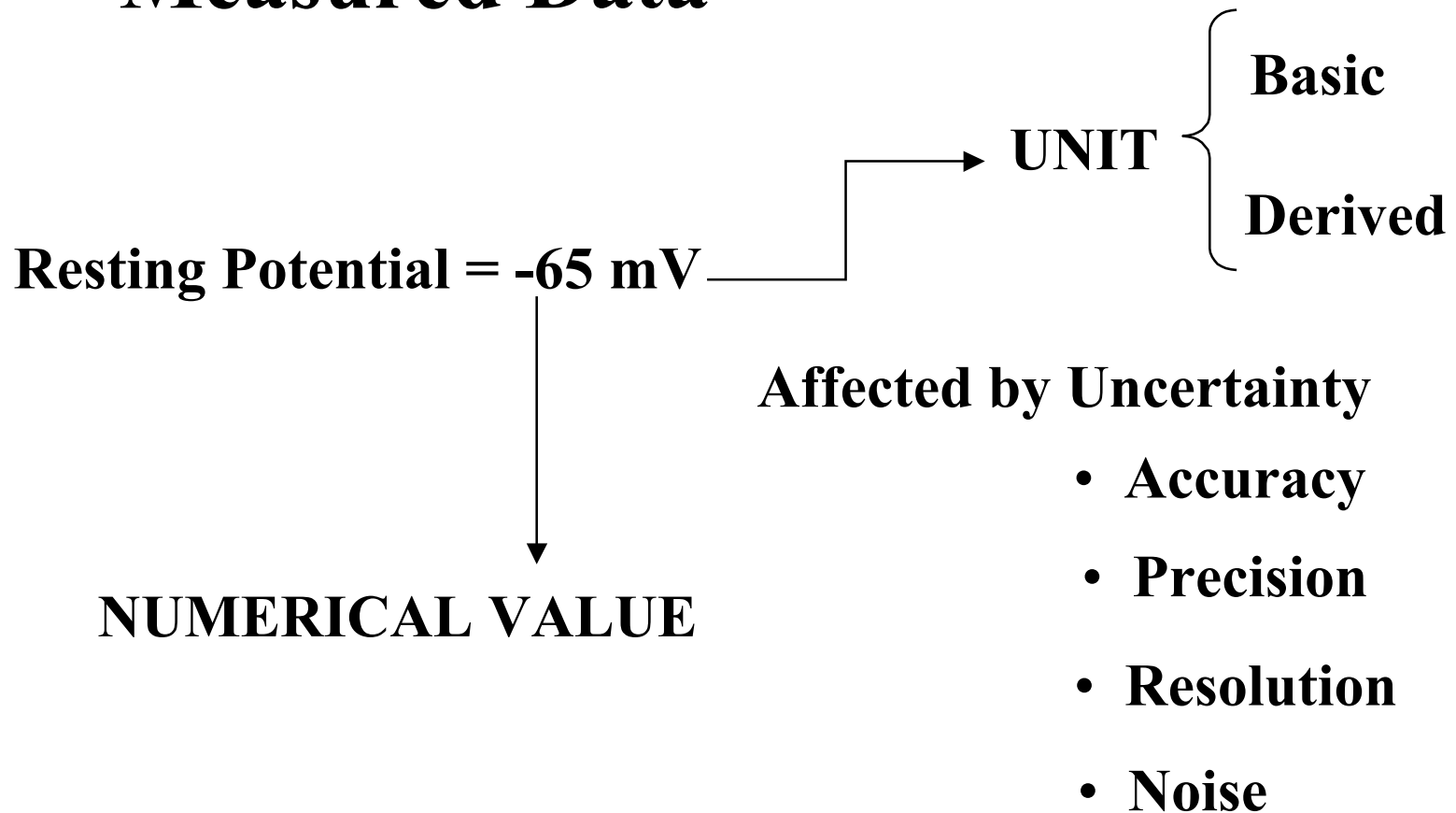
$$\text{Radius} = \text{Diameter}/2 \quad \text{Area} = \pi \times r^2 = 8.04 \text{ cm}^2$$

*Art of Scientific Measurement:*

- *Recognize what can be measured directly.*
- *Devise a way to obtain the desired information from measurement data.*

# Experimentation

## Measured Data



## *Significant Figures (Sig. Figs.)*

*The mass of an object weighed on a triple beam balance (precision  $\pm 0.1\text{g}$ ) is found to be 23.6 g.*

*This quantity contains 3 significant figures, i.e., three experimentally meaningful digits.*

*If the same measurement is made with an analytical balance (precision  $\pm 0.0001\text{g}$ ), the mass might be 23.5820 g (6 sig. fig.)*

# *Evaluating Zero*

## **Zero is SIGNIFICANT when:**

**Is between nonzero digits: 61.09 has four sig Figs.**

**Appears at the end of a number that includes a decimal point 0.500 has three sig. Figs.; 1000. has four sig. Figs.**

## **Zero is NON SIGNIFICANT when:**

**Appears before the first nonzero digit. 0.0025 has two sig. Figs.  
Leading Zeros are non significant**

**Appears at the end of a number without a decimal point. 1,000 has one sig. Fig.; 590 has two sig. Figs.**

# *Exact Numbers*

*Defined numbers, like 12 inches in a foot, 60 minutes in an hour, 1,000mL in one liter.*

*Numbers that occur in counting operations.*

*Exact numbers have an infinite number of sig. figs.*

*Exact numbers do not limit the number of sig. figs. in a calculation.*



# *Scientific Notation*

*Number written as a factor between 1 and 10 multiplied by 10 raised to a power.*

$$0.0468 = 4.68 \times 10^{-2}$$

$$0.00003 = 3.0 \times 10^{-5} \quad (\text{two digits})$$

$$\text{or } 3 \times 10^{-5} \quad (\text{one digit})$$

*Useful to unequivocally designate the significant figures.*

$$1200 = 1.200 \times 10^3 \quad (\text{four digits})$$

$$6,600,000 = 6.6 \times 10^6 \quad (\text{two digits})$$

## *Multiplication or Division*

The answer must contain as many significant figures as in the least precise quantity (measurement with least precision).

What is the density of a piece of metal weighing 36.123 g with a volume of 13.4 mL?

$$d = \frac{\text{mass}}{\text{volume}} = \frac{36.123\text{g}}{13.4\text{mL}} = 2.69575\text{g / mL}$$

↑  
Drop these three digits

↓  
Round off to 7

**ANSWER:** 2.70g / mL

# *Addition or Subtraction*

Keep only as many digits after the decimal point as there are in the least precise quantity

Ex. Add 1.223 g of sugar to 154.5 g of coffee:

$$\text{Total mass} = 1.2 \text{ g} + 154.5 \text{ g} = 155.7 \text{ g}$$

## *Addition or Subtraction*

Note that the rule for addition and subtraction does not relate to significant figures.

The number of significant figures often decreases upon subtraction.

$$\text{Mass beaker + sample} = 52.169 \text{ g} \quad (5 \text{ sig. figs.})$$

$$- \text{Mass empty beaker} = 52.120 \text{ g} \quad (5 \text{ sig. figs.})$$

---

$$\text{Mass sample} = 0.049 \text{ g} \quad (2 \text{ sig figs})$$

## *SI Units Prefixes (Multiples)*

Prefix	Symbol	Value	Power
exa	E	1,000,000,000,000,000,000	$10^{18}$
peta	P	1,000,000,000,000,000	$10^{15}$
tera	T	1,000,000,000,000,	$10^{12}$
giga	G	1,000,000,000	$10^9$
mega	M	1,000,000	$10^6$
kilo	k	1,000	$10^3$
hecto	h	100	$10^2$
deka	da	10	$10^1$

## *SI Units Prefixes (Submultiples)*

<b>Prefix</b>	<b>Symbol</b>	<b>Value</b>	<b>Power</b>
atto	a	0.000000000000000001	$10^{-18}$
femto	f	0.000000000000001	$10^{-15}$
pico	p	0.000000000001	$10^{-12}$
nano	n	0.000000001	$10^{-9}$
micro	$\mu$	0.000001	$10^{-6}$
milli	m	0.001	$10^{-3}$
centi	c	0.01	$10^{-2}$
deci	d	0.1	$10^{-1}$

# *Systeme International (SI)*

## *The Metric System*

<b>Physical Quantity</b>	<b>Name</b>	<b>Symbol</b>
<b>Length</b>	<b>meter</b>	<b>m</b>
<b>Mass</b>	<b>kilogram</b>	<b>kg</b>
<b>Time</b>	<b>second</b>	<b>s</b>
<b>Electric current</b>	<b>ampere</b>	<b>A</b>
<b>Temperature</b>	<b>kelvin</b>	<b>K</b>
<b>Amount of substance</b>	<b>mole</b>	<b>mol</b>
<b>Luminous intensity</b>	<b>candela</b>	<b>cd</b>

**Based on seven DIMENSIONALLY INDEPENDENT quantities**

# Length

Base unit is the meter (m)

**1790s:** 10-millionth of the distance from the equator to the North Pole along a meridian.

**1889:** Distance between two engraved lines on a Platinum-Iridium alloy bar maintained at 0°C in Sevres-France.

**1960-1983:** 1,650,763.73 wavelengths of the orange-red emission of  $^{18}\text{Kr}$  at standard conditions

**Since 1983:**  $1/299,792,458$  of the distance traveled by light in 1 second through vacuum.



# *Length*

## *Engineering dimensions*

$$1 \text{ km} = 10^3 \text{ m}$$

$$1 \text{ in} = 2.54 \text{ cm}$$

$$1 \text{ cm} = 10^{-2} \text{ m}$$

$$1 \text{ mile} = 1.61 \text{ km}$$

$$1 \text{ mm} = 10^{-3} \text{ m}$$

$$1 \text{ } \mu\text{m} = 10^{-6} \text{ m}$$

## *Atomic dimensions*

$$1 \text{ nm} = 10^{-9} \text{ m}$$

$$1 \text{ } \text{\AA} = 10^{-10} \text{ m}$$

## *Mass*    Base unit is the kilogram (kg)

**International prototype:** a platinum-iridium cylinder maintained in Sevres-France.

$$1 \text{ kg} = 10^3 \text{ g}; \quad 1 \text{ mg} = 10^{-3} \text{ g}$$

A mass of 1 kg has a terrestrial weight of 9.8 newtons (2.2 lbs)

Depending on the precision required and the amount of material, different balances are used:

- The Quadruple Beam Balance ( $\pm 10$  mg)
- The Top Loading Balance ( $\pm 1$  mg).
- The Analytical Balance ( $\pm 0.1$  mg).

# Comparison of Temperature Scales

$$^{\circ}\text{F} = (1.8 \times ^{\circ}\text{C}) + 32$$

Fahrenheit

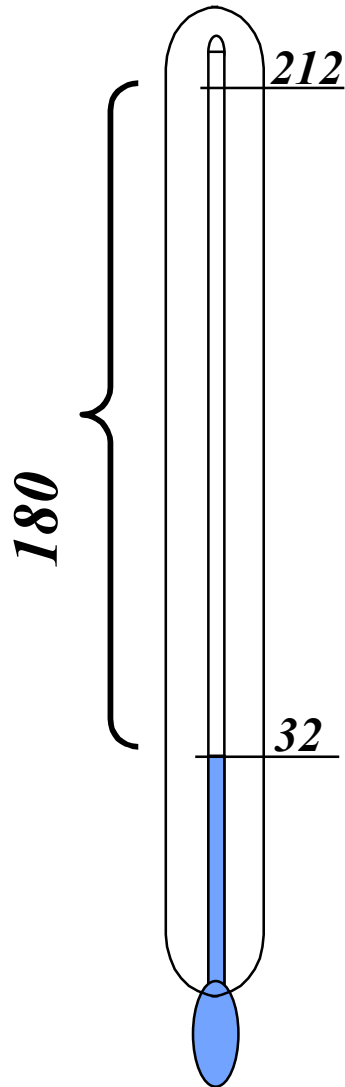
$$^{\circ}\text{C} = (^{\circ}\text{F} - 32) / 1.8$$

Celsius

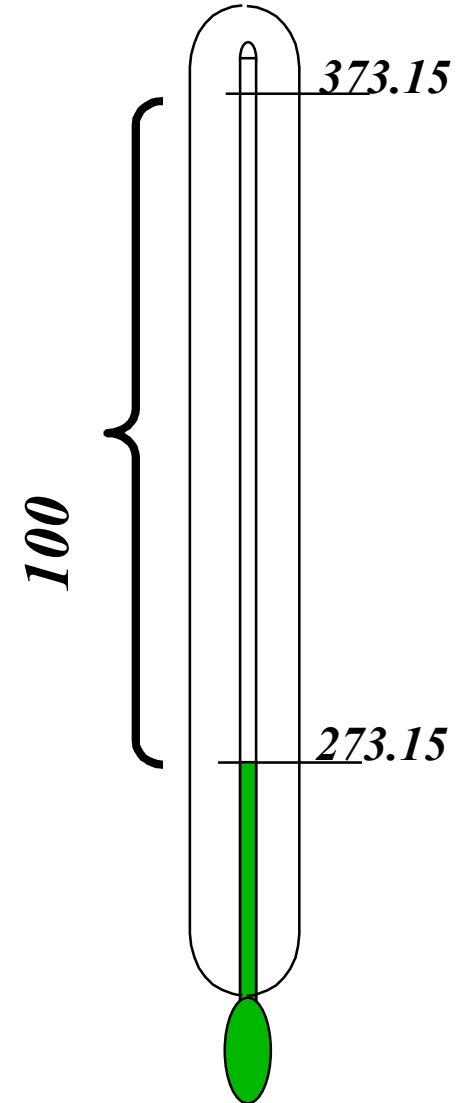
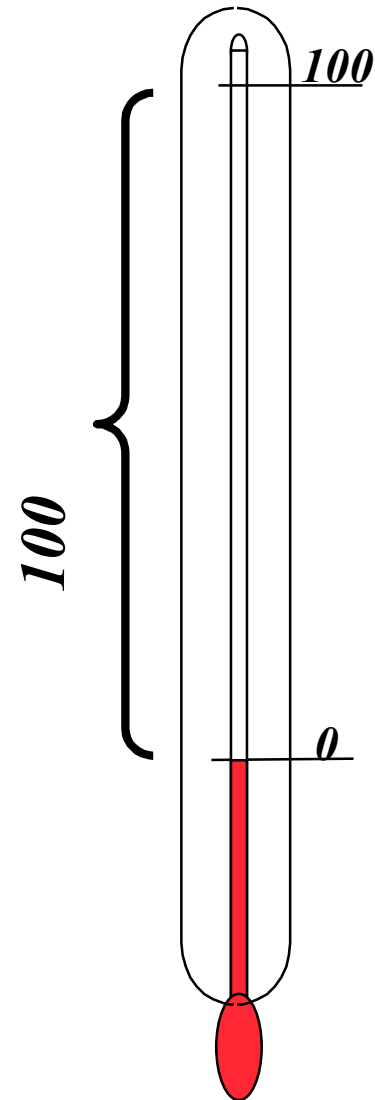
$$\text{K} = ^{\circ}\text{C} + 273.15$$

Kelvin

Boiling point of water



Freezing point of water



# *Temperature Conversion*

$$\mathbf{K = ^\circ C + 273.15}$$

$$\mathbf{^\circ F = (1.8 \times ^\circ C) + 32}$$

$$\mathbf{^\circ C = (^\circ F - 32) / 1.8}$$

Ex. 2.20 Convert 110°F to °C and K

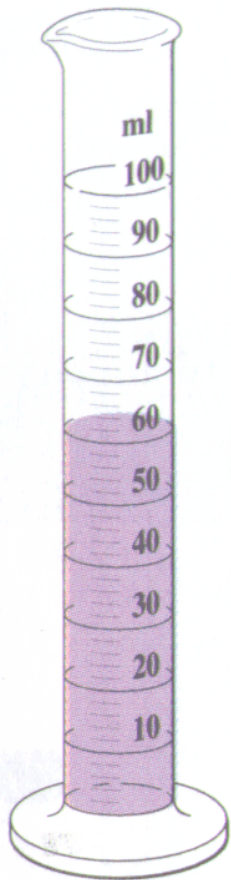
$$^\circ\text{C} = (68^\circ - 32^\circ) / 1.8 = 20^\circ\text{C}$$

$$\text{K} = 20 + 273 = 293 \text{ K}$$


## *Derived Units*

<b>Physical quantity</b>	<b>Name</b>	<b>Symbol</b>	<b>Definition</b>
<b>Frequency</b>	<b>Hertz</b>	<b>Hz</b>	<b><math>s^{-1}</math></b>
<b>Force</b>	<b>newton</b>	<b>N</b>	<b><math>m.kg.s^{-2}</math></b>
<b>Pressure, stress</b>	<b>pascal</b>	<b>Pa</b>	<b><math>N.m^{-2} = m^{-1}.kg.s^{-2}</math></b>
<b>Energy work, heat</b>	<b>joule</b>	<b>J</b>	<b><math>N.m = m^2.kg.s^{-2}</math></b>
<b>Electric charge</b>	<b>coulomb</b>	<b>C</b>	<b><math>A.s</math></b>
<b>Electromotive Force</b>	<b>volt</b>	<b>V</b>	<b><math>J.C^{-1} = m^2.kg.s^{-3}.A^{-1}</math></b>
<b>Electric Resistance</b>	<b>ohm</b>	<b><math>\square</math></b>	<b><math>V.A^{-1} = m^2.kg.s^{-3}.A^{-2}</math></b>

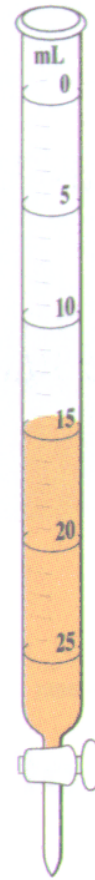
# *Measurement of Volume*



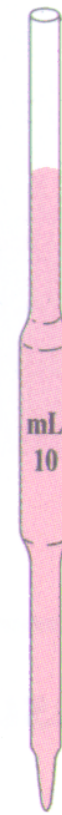
Graduated  
cylinder



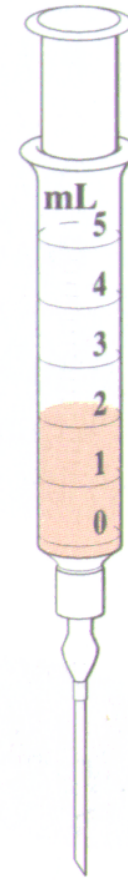
Volumetric  
flask



Buret



Pipet



Syringe

# *Conversion Factors*

$$1 \text{ in} = 2.54\text{cm} \quad \square \quad \underbrace{\frac{2.54\text{cm}}{1 \text{ in}} \quad \text{or} \quad \frac{1 \text{ in}}{2.54\text{cm}}}_{\text{Two conversion factors}}$$

**Two conversion factors**

$$\cancel{\text{Unit given}} \quad \square \quad \frac{\text{Unit needed}}{\cancel{\text{Unit given}}} = \text{Unit needed}$$

# *Dimensional Analysis*

- *Read Problem. What needs to be solved for? Write it down*
- *Tabulate data given. Label all factors with proper units*
- *Determine principles involved and unit relationships*
- *Set up the problem deciding for the proper conversion factor*
- *Perform mathematical operations*
- *Check if the answer is reasonable*



# *Simple, One Step Conversions*

*CBS News reported the barometric pressure to be 99.6 kPa.  
Express this in mm Hg.*

*Conversion factor : 101.3 kPa = 760 mm Hg*

$$\text{pressure (mmHg)} = 99.6 \text{ kPa} \times \frac{760 \text{ mm Hg}}{101.3 \text{ kPa}} = 747 \text{ mmHg}$$

*Unit given*                      *Unit given*                      *Unit needed*

## *Simple, One Step Conversions*



*A rainbow trout is measured to be 16.2 in. long. What is the length in cm?*

$$\text{length in cm} = 16.2 \text{ in} \times \frac{2.54 \text{ cm}}{1 \text{ in}} = 41.1 \text{ cm}$$


*Note the cancellation of units. To convert from centimeters to inches, the conversion factor would be 1 in / 2.54 cm.*

# *Multiple Conversion Factors*

A baseball is thrown at 89.6 miles per hour. What is the speed in meters per second?

Mile/hour  m/hour  m/s

$$1 \text{ mile} = 1.609 \text{ km} = 1.609 \times 10^3 \text{ m}; \quad 1 \text{ h} = 3600 \text{ s}$$

$$\text{speed} = 89.6 \frac{\text{miles}}{\text{hour}} \times \frac{1.609 \times 10^3 \text{ m}}{1 \text{ mile}} \times \frac{1 \text{ h}}{3600 \text{ s}} = 40.0 \text{ m / s}$$


**Three sig. figs.**

## *Units raised to a Power*

The conversion factor must also be raised to that power.

A circle has an area of 28 in<sup>2</sup>. Calculate area in cm<sup>2</sup>.

$$\text{in}^2 \quad \longrightarrow \quad \text{cm}^2$$

$$(1 \text{ in})^2 = (2.54 \text{ cm})^2$$

$$\text{Area} = 28 \text{ in}^2 \times \frac{(2.54 \text{ cm})^2}{(1 \text{ in})^2} = \frac{6.45 \text{ cm}^2}{1 \text{ in}^2} = 1.8 \times 10^2 \text{ cm}^2$$



**Two sig. figs.**

## *Density: Conversion factor*

*mass*  $\longleftrightarrow$  *volume*

*An empty flask weighs 22.138 g. You pipet 5.00 mL of octane into the flask. The total mass is 25.598 g. What is the density?*

$$\begin{array}{r} \text{Octane amount in g:} \\ 25.598 \\ -22.138 \\ \hline 3.460\text{g} \end{array}$$

$$d = \frac{3.460\text{g}}{5.00\text{ mL}} = 0.692\text{g / mL}$$

*What is the volume occupied by ten grams of octane?*

$$V = 10.00\text{g} \times \frac{1\text{ mL}}{0.692\text{g}} = 14.5\text{ mL}$$

# *Solubility*

Expressed as grams of solute per 100 g of solvent in the CRC (Chemical Rubber Company) Chemistry and Physics Handbook.

For lead nitrate in aqueous solution:

Solubility (g/100g water)	T (°C)
50	10
140	100

## *Solubility*

How much water is required to dissolve 80 g of lead nitrate at 100°C?

$$\text{Mass water} = 80\text{g lead nitrate} \times \frac{100\text{g water}}{140\text{g lead nitrate}} = 57\text{g water}$$



***Conversion factor***  
*(from table)*

Cool the solution to 10°C. How much lead nitrate remains in solution?

$$\text{Mass of lead nitrate} = 57\text{g water} \times \frac{50\text{g lead nitrate}}{100\text{g water}} = 28\text{g lead nitrate}$$

28g lead nitrate remain in solution

80g lead nitrate were initially in solution

$$80\text{g} - 28\text{g} = 52\text{g lead nitrate crystallizes out of solution}$$