

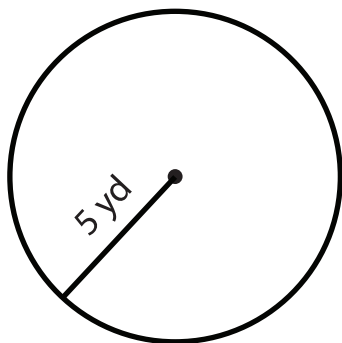
Name : _____

Score : _____ Date : _____

Radius, Diameter and Circumference of a Circle

Find the diameter and circumference of the following circles with given radius

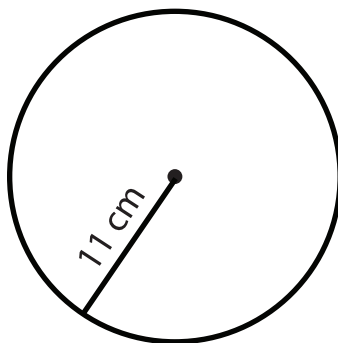
1



Diameter = _____

Circumference = _____

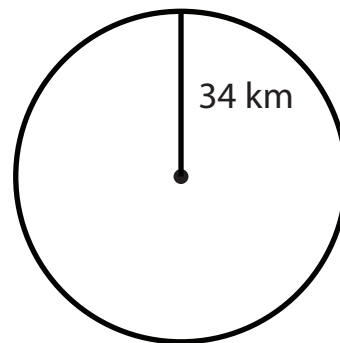
2



Diameter = _____

Circumference = _____

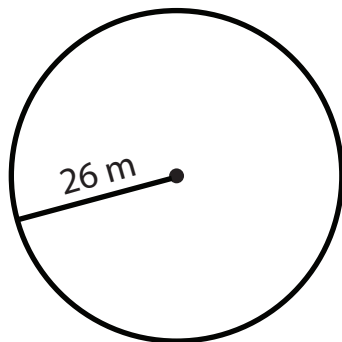
3



Diameter = _____

Circumference = _____

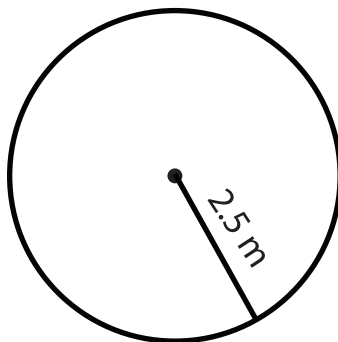
4



Diameter = _____

Circumference = _____

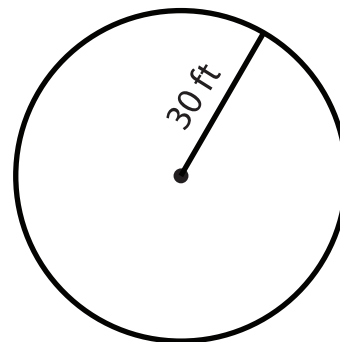
5



Diameter = _____

Circumference = _____

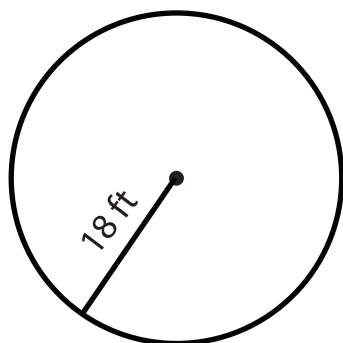
6



Diameter = _____

Circumference = _____

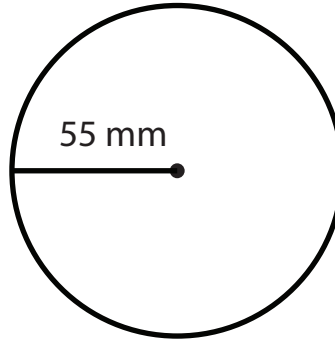
7



Diameter = _____

Circumference = _____

8



Diameter = _____

Circumference = _____