



ADDITION PROBLEMS TO 10 SHEET 1










		WORKING OUT
1)	<p>There are 5  .</p> <p>There are 2  .</p> <p>What is the sum? $5 + 2 =$ _____</p>	
2)	<p>There are 3  .</p> <p>3 more  come.</p> <p>How many in all? _____</p>	
3)	<p>I have 4  .</p> <p>I buy 4  more.</p> <p>How many do I have now? _____</p>	
4)	<p>Jack has 2  .</p> <p>Jill has 4  .</p> <p>How many in all? _____</p>	
5)	<p>There are 7  .</p> <p>2  more come.</p> <p>How many are there now? _____</p>	
6)	<p>I have 3  .</p> <p>I buy 5  more.</p> <p>How many do I have now? _____</p>	

Name

Date



ADDITION PROBLEMS TO 10 SHEET 1 ANSWERS

		WORKING OUT
1)	There are 5  . There are 2  . What is the sum? $5 + 2 = \underline{7}$	
2)	There are 3  . 3 more  come. How many in all? $\underline{6}$	
3)	I have 4  . I buy 4  more. How many do I have now? $\underline{8}$	
4)	Jack has 2  . Jill has 4  . How many in all? $\underline{6}$	
5)	There are 7  . 2  more come. How many are there now? $\underline{9}$	
6)	I have 3  . I buy 5  more. How many do I have now? $\underline{8}$	