

2019–2020 AP HUMAN GEOGRAPHY SUMMER ASSIGNMENT

What am I doing? Labeling world outline maps with the features listed below building an understanding of the political and physical geography world regions.

Why am I doing this? Part of entering an AP class is an assumption of a certain level of background knowledge and skills. You will need a strong working mental map in order to be successful in this course.

When are the maps due? The Second Day of School! **August 27, 2019.**

How many maps should I submit? 14

Map 1 – Map Basics	Map 8 – Sub-Saharan Africa
Map 2 – Land Features	Map 9 – North Africa & the Middle East
Map 3 – Rivers and Lakes	Map 10 – E Asia, C Asia, S Asia, and SE Asia
Map 4 – Seas, Gulfs, and other Major Water Features	Map 11 – Central and South Asia
Map 5 – North America and the Caribbean	Map 12 – Oceania
Map 6 – South America	Maps 13 – World Regions A Big Picture
Map 7 – Europe	Maps 14 –World Regions A Closer Look

What do I label on each map? Each map has a list of countries, cities and/or regions to label. The list and corresponding numbers will serve as the key. Label each element with the correct number in the correct location. Only items labeled on the correct maps will be scored and tested. **Countries are listed in regular font and cities are listed in *italics*.** NOTE: **Bolded** items have emphasis in APHG.

When is the first map test? Tests will vary but there will be one test in the first six weeks and more through the year. It is essential that you build a mental map of the world and the placement of states (countries), cities and natural phenomena.

How do I study? Studying for map tests takes time and preparation. The first step is to find each feature and label blank outline maps. Use the list below and quiz yourself by labeling blank maps and seeing how much you know. Listed below are links where you can test yourself online.

Coloring the map is optional (except for map 13 and 14), but will (WILL!!!) help with memory.

Online Map Quizzes

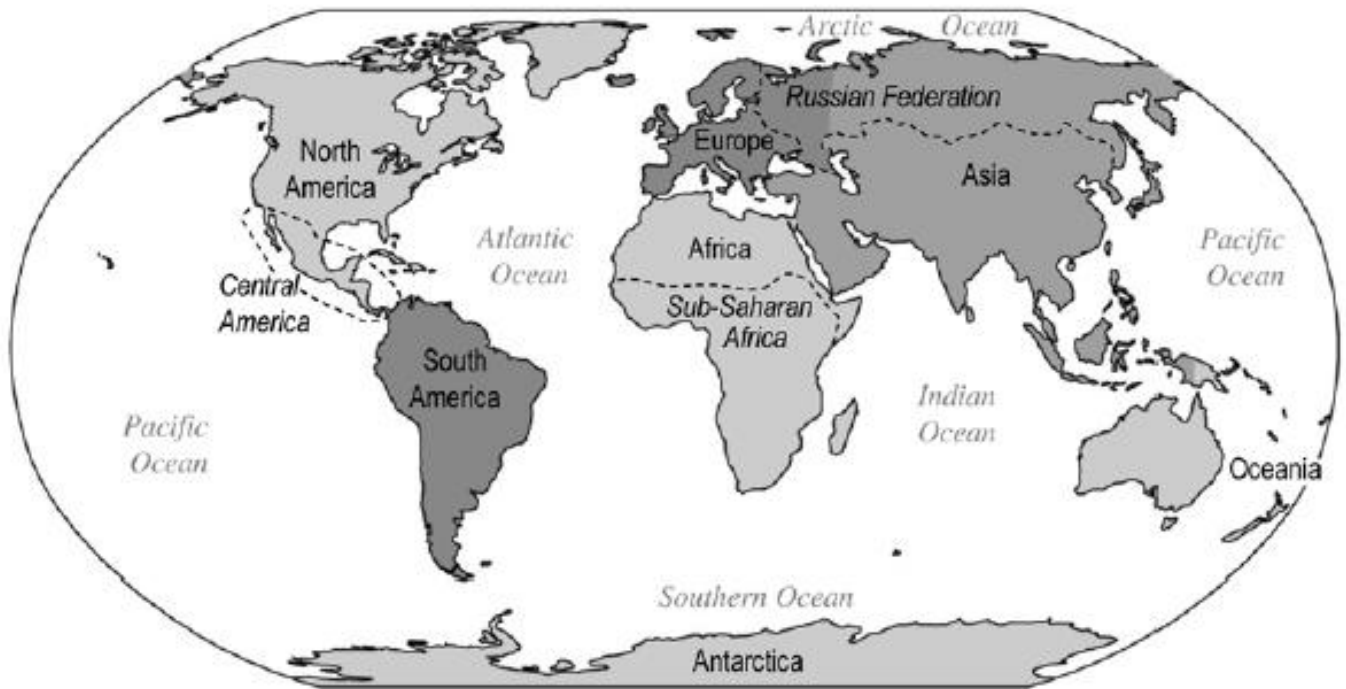
http://www.sheppardsoftware.com/Geography.htm	http://ilike2learn.com/
http://www.sporcle.com/games/category/geography	http://www.maps.com/funfacts.aspx

If you have any questions or need additional help completing the assignment, contact Ms. Shelby Steward:

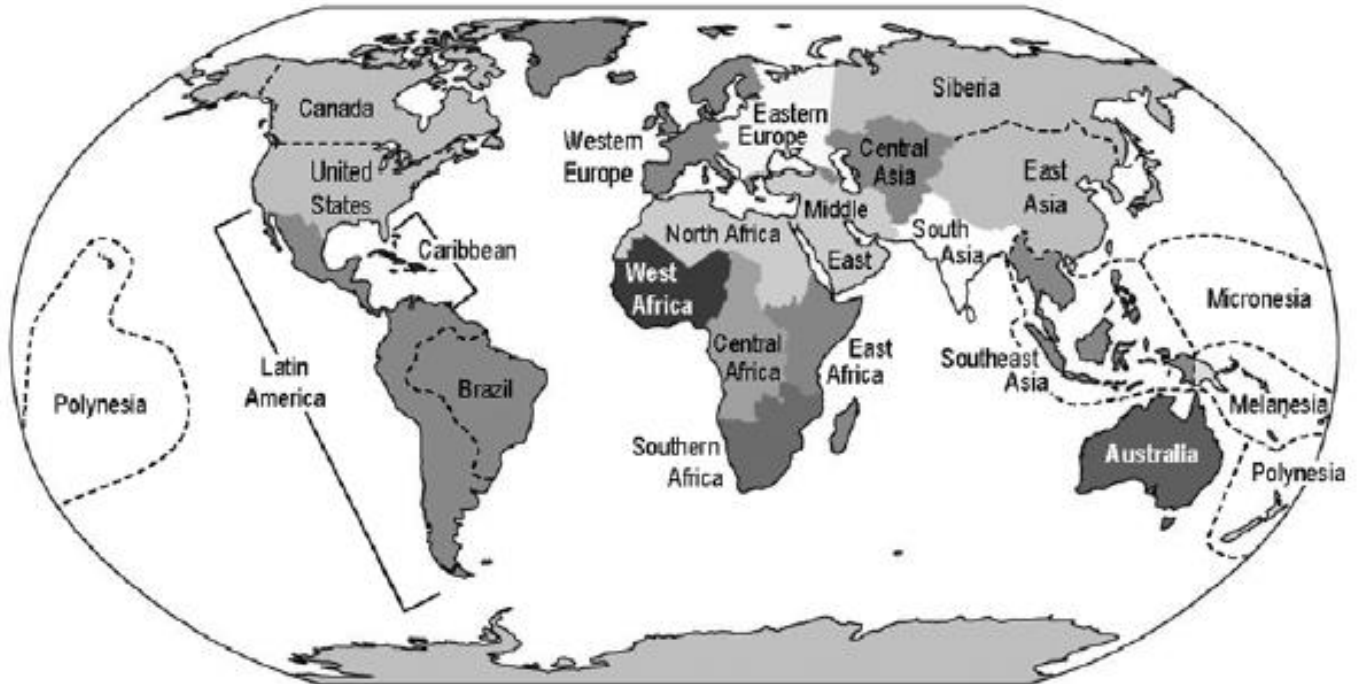
Shelby.Steward@houstonisd.org

Use these maps as a reference for labeling and coloring maps 13 and 14.

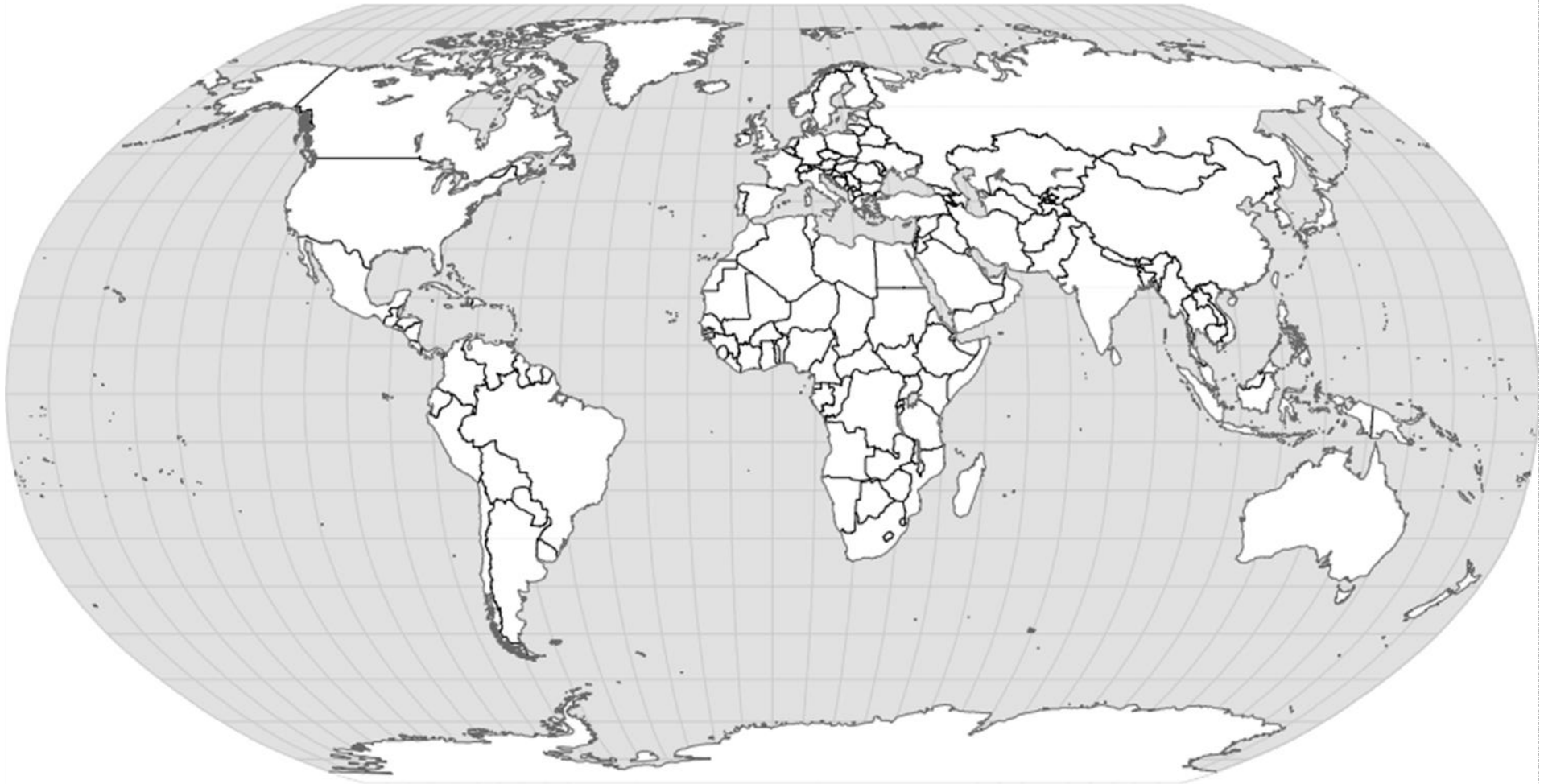
AP Human Geography: World Regions — A Big Picture View



AP Human Geography: World Regions — A Closer Look



MAP 1: BASICS



Label the following:

5 Oceans

Arctic Circle

7 Continents

Antarctic Circle

Tropic of Cancer

Prime Meridian

Equator

International Date Line

Tropic of Capricorn

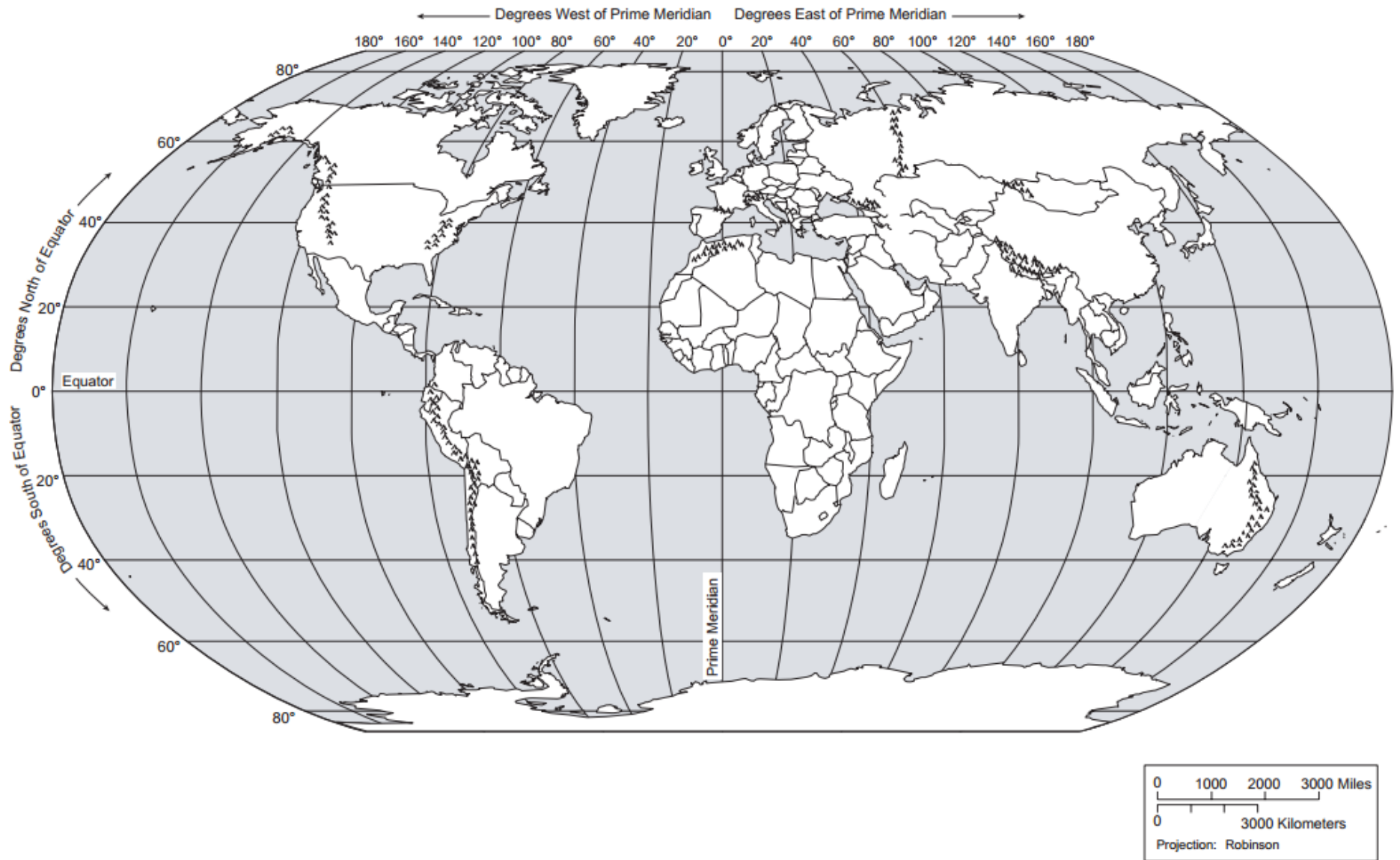
Southern Ocean

After labeling Map 1, complete the following sentences:

Lines of latitude run from _____ to _____ and measure distances _____ and _____ of the _____.

Lines of longitude run from _____ to _____ and measure distances _____ and _____ of the _____.

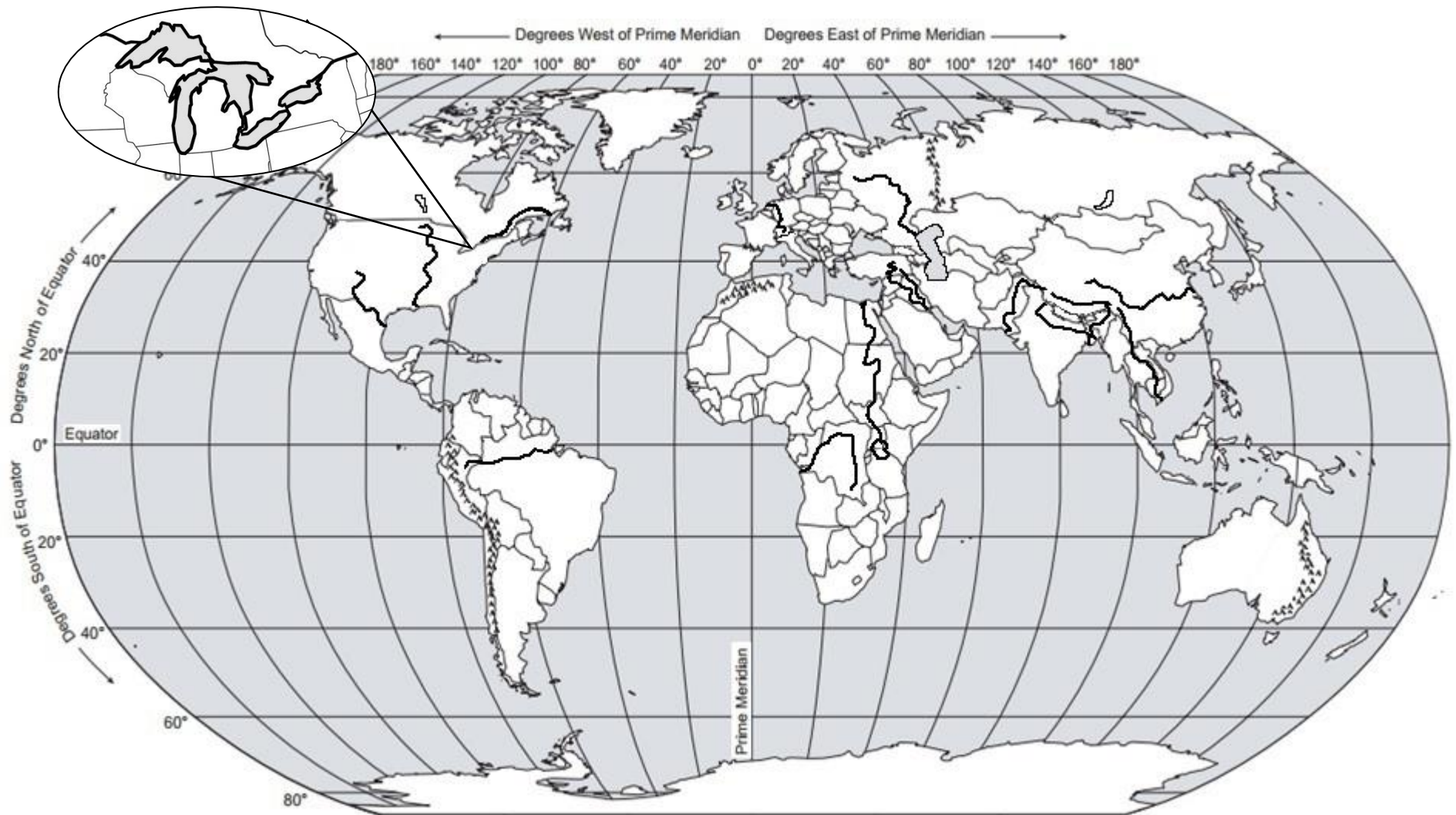
MAP 2: LAND FEATURES



Label the following:

- | | | | | |
|--------------|-----------------|------------|------------------|--------------|
| 1. Rockies | 4. Appalachians | 7. Sahara | 10. Urals | 13. Kalahari |
| 2. Himalayas | 5. Caucasus | 8. Alps | 11. Rub al Khali | 14. Namib |
| 3. Gobi | 6. Andes | 9. Atacama | 12. Patagonia | |

MAP 3: RIVERS AND LAKES



Label the following:

1. Brahmaputra River
2. Tigris River
3. Euphrates River
4. Yangtze River
5. Nile River

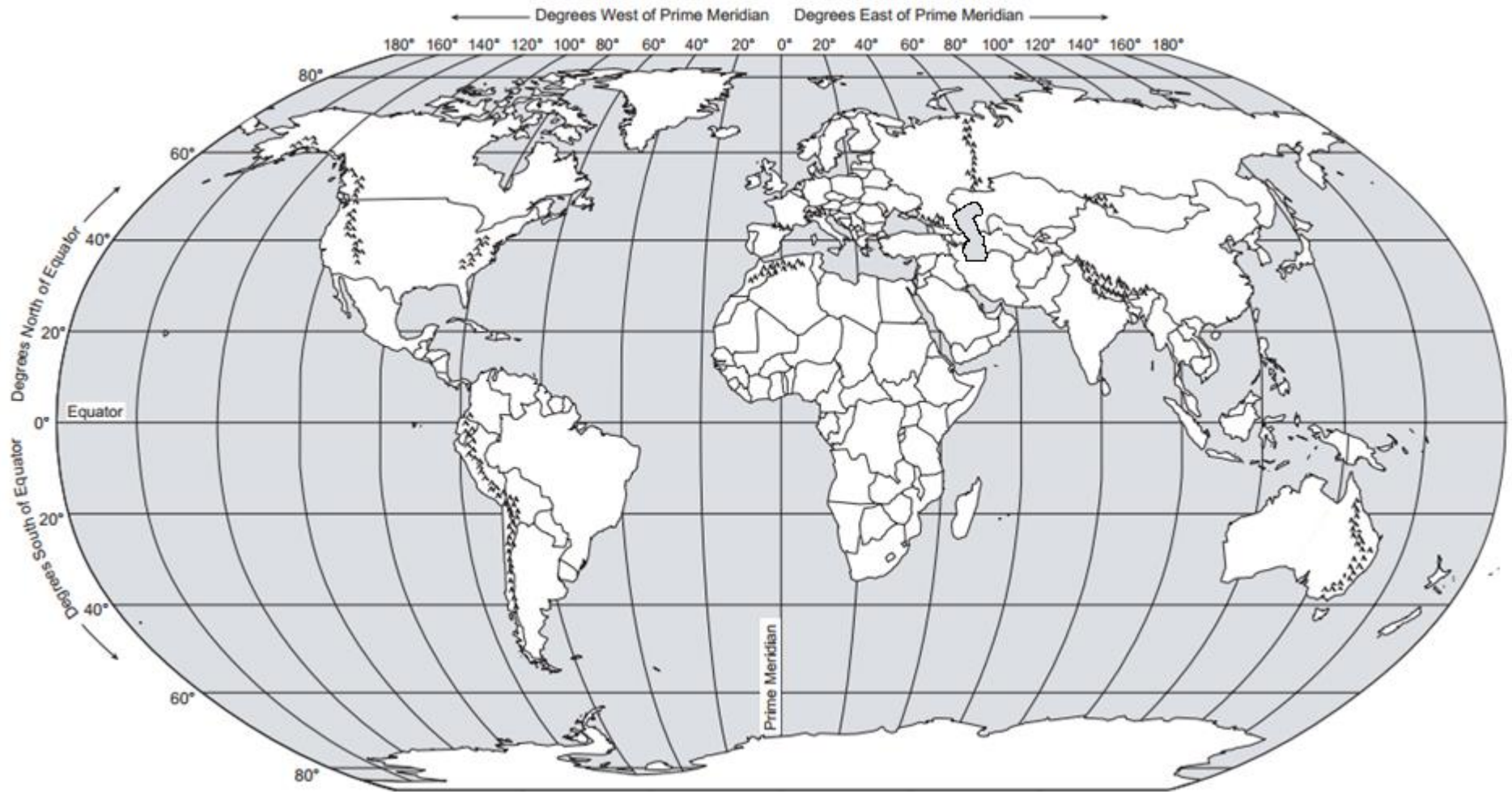
6. Mississippi River
7. Indus River
8. Mekong River
9. Amazon River
10. Lake Victoria

11. Ganges River
12. Congo River
13. Volga River
14. Lake Winnipeg
15. Rhine River

16. Lake Superior
17. Lake Michigan
18. Lake Erie
19. Lake Ontario
20. Lake Huron

21. Rio Grande River
22. Lake Baikal
23. St. Lawrence River

MAP 4: SEAS, GULFS, AND OTHER MAJOR WATER FEATURES



Label the following:

1. Caspian Sea
2. Mediterranean Sea
3. Red Sea
4. Aral Sea

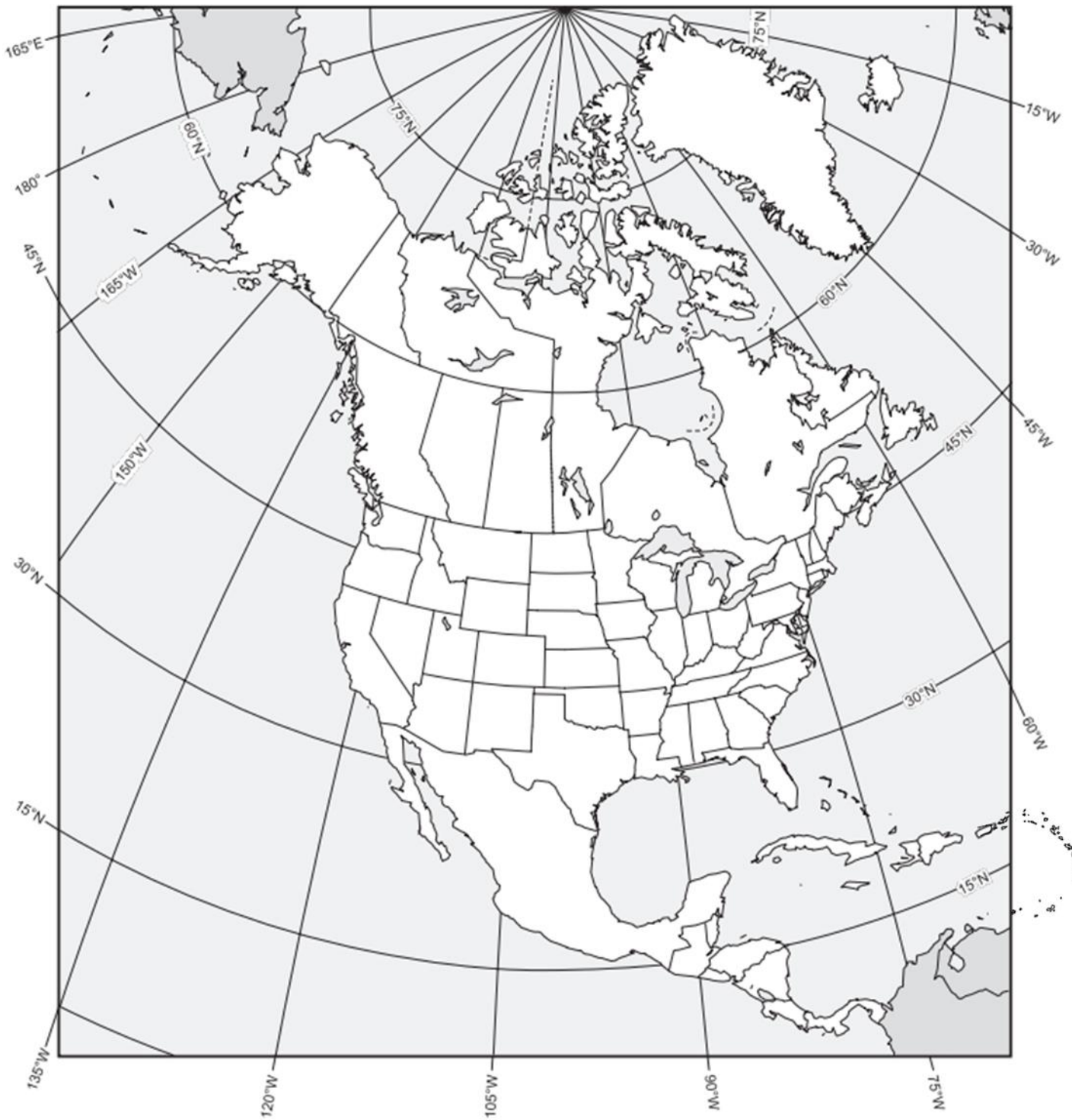
5. South China Sea
6. Caribbean Sea
7. Gulf of Mexico
8. Persian Gulf

9. Gulf of Aden
10. Strait of Hormuz
11. Dardanelles Strait
12. Bosphorus Strait

13. Strait of Malacca
14. Mandeb Strait
15. Strait of Gibraltar
16. Panama Canal

17. English Channel

MAP 5: NORTH AMERICA AND THE CARIBBEAN



Label the following:

- | | | | | |
|-------------------------|------------------------|--------------------------|-------------------|--------------------------|
| 1. Bahamas | 6. Cuba | 11. Dominican Republic | 16. Haiti | 21. Jamaica |
| 2. Trinidad and Tobago | 7. Belize | 12. Costa Rica | 17. El Salvador | 22. Guatemala |
| 3. Honduras | 8. Mexico | 13. Nicaragua | 18. Panama | 23. Canada |
| 4. United States | 9. Greenland | 14. Chicago | 19. Havana | 24. Los Angeles |
| 5. Managua | 10. Mexico City | 15. New York City | 20. Ottawa | 25. Washington DC |

MAP 6: SOUTH AMERICA



Label the following:

- | | | | | |
|---------------------|--------------------------|----------------------|-----------------------------|---------------------|
| 1. Argentina | 6. Colombia | 11. Uruguay | 16. French Guiana | 21. Lima |
| 2. Ecuador | 7. Paraguay | 12. Chile | 17. Buenos Aires | 22. Brasília |
| 3. Peru | 8. Venezuela | 13. São Paulo | 18. Bolivia | |
| 4. Caracas | 9. Rio de Janeiro | 14. Suriname | 19. Falkland Islands | |
| 5. Santiago | 10. Guyana | 15. Brazil | 20. Bogotá | |

MAP 7: EUROPE

worldatlasbook.com

Europe



Label the following:

1. *The Hague*
2. *Rome*
3. *Moscow*
4. *London*
5. *St. Petersburg*
6. *Brussels*
7. *Paris*
8. *Madrid*
9. *Berlin*
10. Switzerland
11. Netherlands
12. Monaco
13. Luxembourg
14. Liechtenstein
15. **Germany**
16. **France**
17. Belgium
18. Austria
19. **Spain**
20. **Slovenia**
21. **Serbia**
22. San Marino
23. Portugal
24. Montenegro
25. Malta
26. Macedonia
27. **Italy**
28. *Holy See (Vatican City)*
29. **Greece**
30. **Croatia**
31. **Bosnia and Herzegovina**
32. Andorra
33. Albania
34. Belarus
35. **Poland**

36. **Denmark**

37. Latvia

38. Bulgaria

39. Romania

40. Estonia

41. Lithuania

42. **Czech Republic**

43. **Russia**

44. Finland

45. Norway

46. Hungary

47. Slovakia

48. **Iceland**

49. **Sweden**

50. Moldova

51. Ukraine

52. **Ireland**

53. **United Kingdom**

54. **Kosovo**

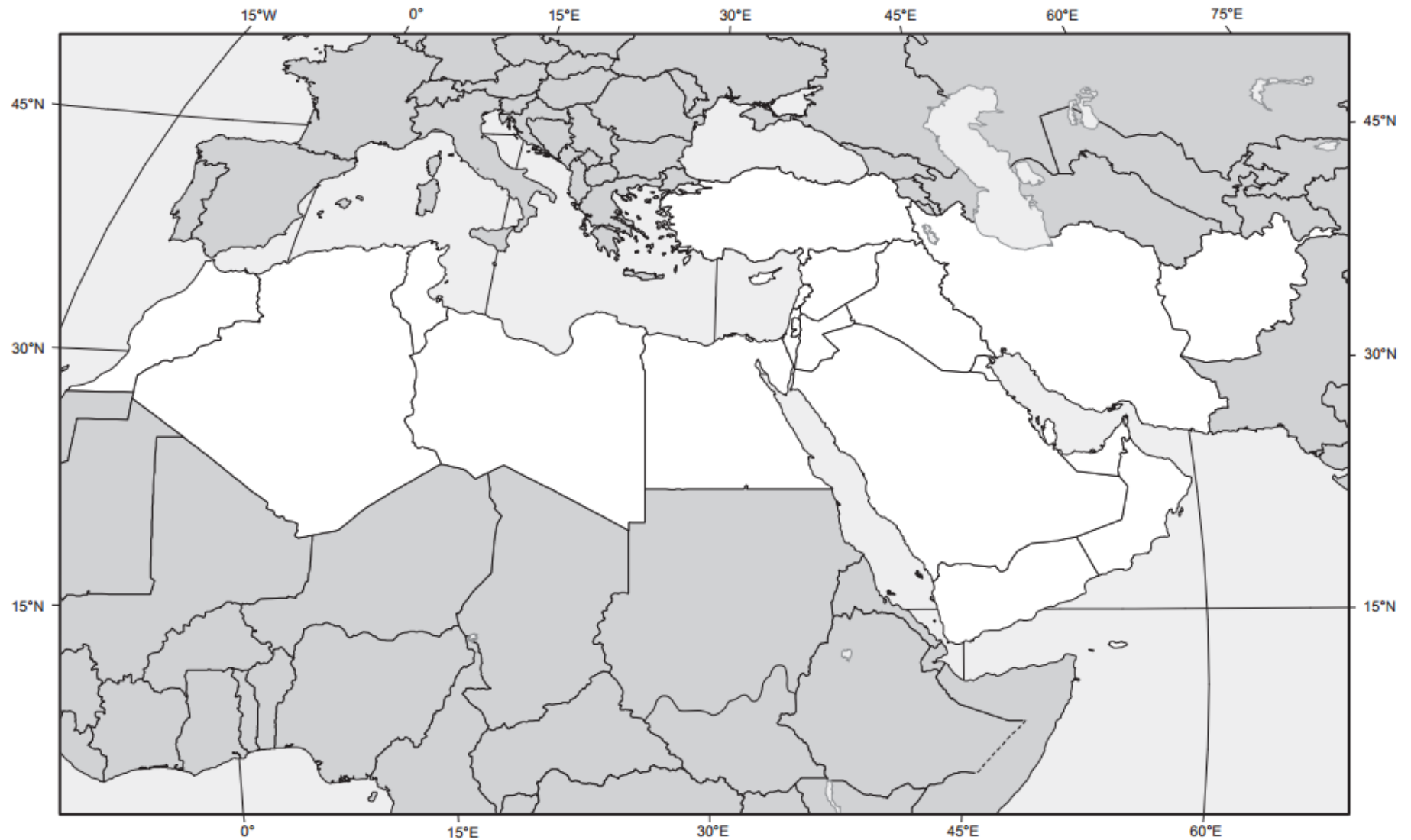
MAP 8: SUB-SAHARAN AFRICA



Label the following:

- | | | | | |
|-------------------|-------------------------|-------------------------|---|------------------|
| 1. Burundi | 12. Djibouti | 23. Eritrea | 34. Ethiopia | 45. Niger |
| 2. Madagascar | 13. Botswana | 24. Chad | 35. Rwanda | |
| 3. Somalia | 14. South Sudan | 25. Uganda | 36. Tanzania | |
| 4. Zimbabwe | 15. Angola | 26. Cameroon | 37. Central African Republic | |
| 5. Congo | 16. Togo | 27. Zambia | 38. Ghana | |
| 6. Lesotho | 17. Namibia | 28. South Africa | 39. Swaziland | |
| 7. Burkina Faso | 18. Cape Verde | 29. Côte d'Ivoire | 40. Gambia | |
| 8. Benin | 19. Liberia | 30. Mali | 41. Mauritania | |
| 9. Nigeria | 20. Senegal | 31. Sierra Leone | 42. Democratic Republic of Congo | |
| 10. Addis Ababa | 21. Cape Town | 32. Lagos | 43. Nairobi | |
| 11. Mogadishu | 22. Johannesburg | 33. Accra | 44. Kenya | |

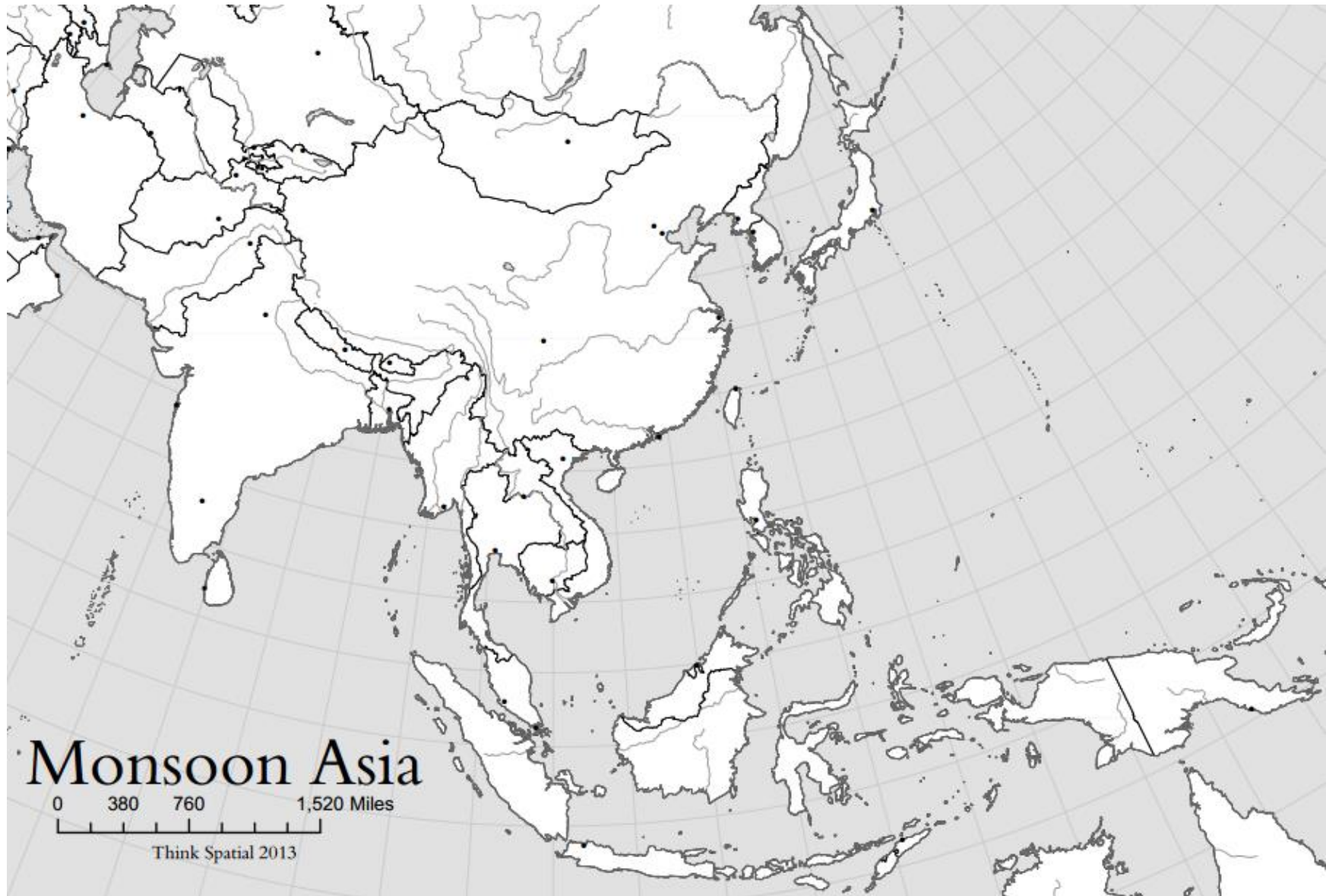
MAP 9: NORTH AFRICA AND THE MIDDLE EAST



Label the following:

- | | | | | |
|------------------|--------------------|---------------------------------|----------------------|-------------------------|
| 1. Algeria | 8. Egypt | 15. Libya | 22. Morocco | 29. Sudan |
| 2. Tunisia | 9. Armenia | 16. Azerbaijan | 23. Jerusalem | 30. Cyprus |
| 3. Georgia | 10. Iraq | 17. Israel | 24. Jordan | 31. Kuwait |
| 4. Lebanon | 11. Oman | 18. Palestine | 25. Qatar | 32. Saudi Arabia |
| 5. Syria | 12. Turkey | 19. United Arab Emirates | 26. Yemen | 33. Baghdad |
| 6. <i>Beirut</i> | 13. Cairo | 20. <i>Damascus</i> | 27. Istanbul | 34. Iran |
| 7. <i>Tehran</i> | 14. <i>Tripoli</i> | 21. Mecca | 28. Medina | 35. Afghanistan |

MAP 10: EAST AND SOUTHEAST ASIA



Label the following:

- | | | | | |
|---------------------|-------------------|----------------------|------------------------|------------------------|
| 1. <i>Tokyo</i> | 6. <i>Jakarta</i> | 11. Vietnam | 16. Philippines | 21. North Korea |
| 2. <i>Shanghai</i> | 7. Japan | 12. <i>Hong Kong</i> | 17. Myanmar (Burma) | 22. Cambodia |
| 3. <i>Seoul</i> | 8. <i>Beijing</i> | 13. Thailand | 18. China | 23. Brunei |
| 4. <i>Pyongyang</i> | 9. <i>Bangkok</i> | 14. Singapore | 19. Laos | 24. Mongolia |
| 5. Taiwan | 10. Timor-Leste | 15. Malaysia | 20. South Korea | 25. Indonesia |

MAP 11: CENTRAL AND SOUTH ASIA



Label the following:

1. Sri Lanka
2. Bhutan
3. Kyrgyzstan

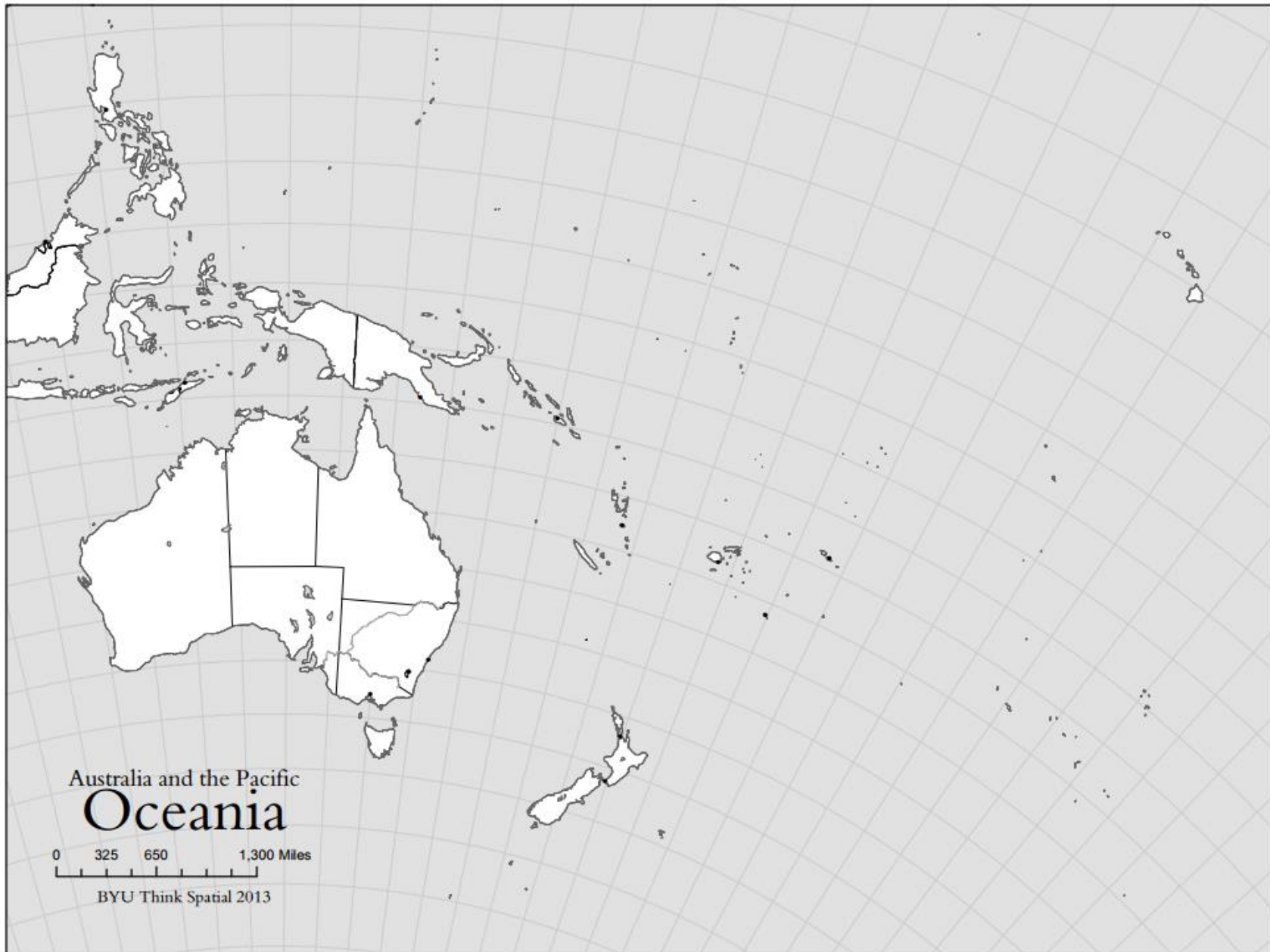
4. Pakistan
5. Bangladesh
6. Tajikistan

7. Nepal
8. Kashmir
9. Turkmenistan

10. Maldives
11. Kazakhstan
12. Calcutta

13. India
14. Uzbekistan
15. New Delhi

MAP 12: OCEANIA



Label the following and draw a circle around Micronesia, Melanesia, and Polynesia.

1. Sydney

3. Auckland

5. New Zealand

7. Polynesia

9. Papua New Guinea

2. Melbourne

4. Australia

6. Micronesia

8. Melanesia

MAP 13: WORLD REGIONS (BIG PICTURE)



This map will be colored based on region not state (country). Each REGION must be a single color. Draw a circle around Central America, Sub-Saharan Africa, and the Russian Federation. Use the sample map provided to help you.

1. North America

3. Africa

5. Central America

7. Sub-Saharan Africa

9. South America

2. Asia

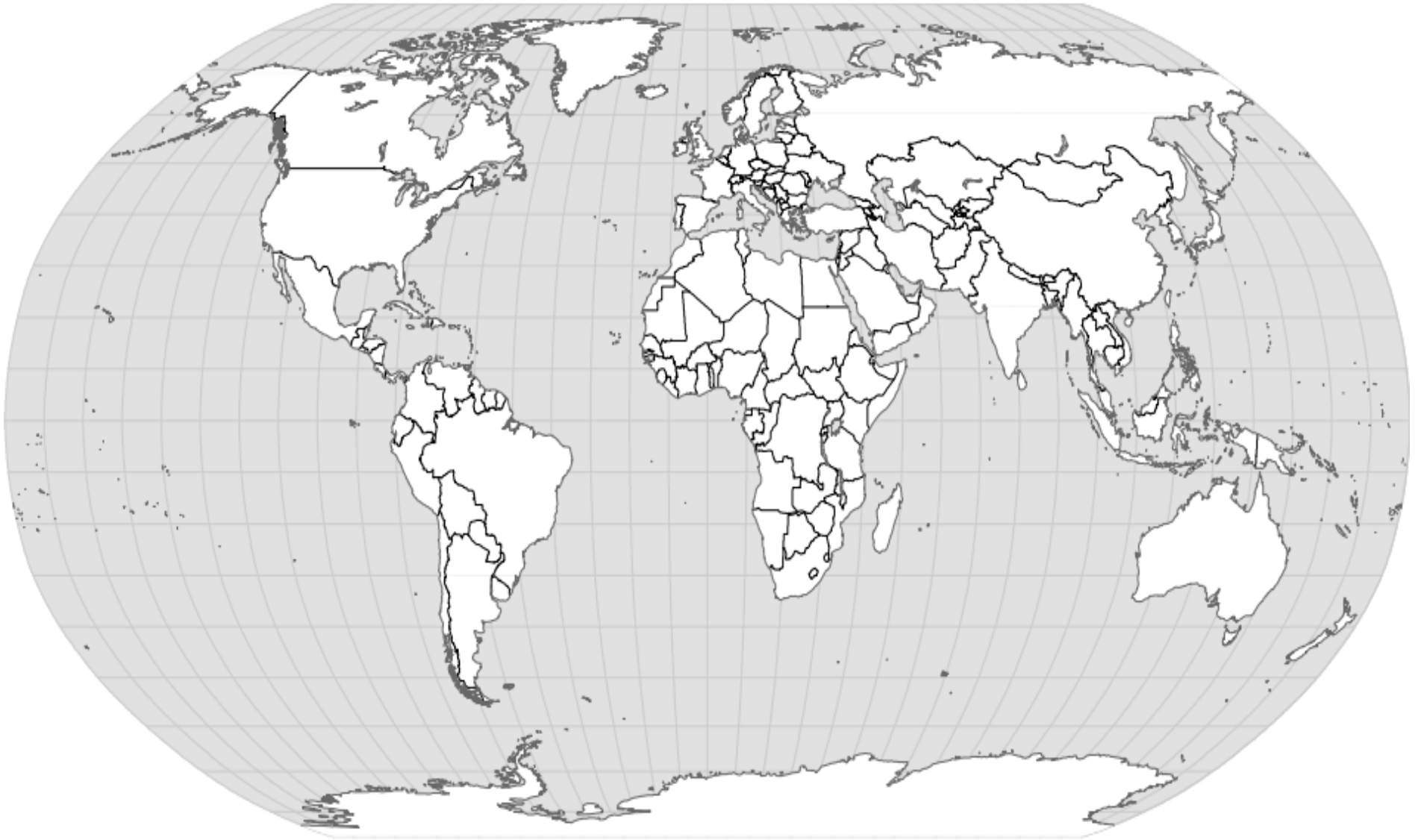
4. Europe

6. Oceania

8. Russian Federation

10. Antarctica

MAP 14: WORLD REGIONS (CLOSER LOOK)



This map will be colored based on region not state (country). Each REGION must be a single color. Draw a circle around Eastern Europe, East Asia, SE Asia, and S Asia. Bracket the Caribbean and Latin America. Use the sample map provided to help you.

1. Latin America

4. Western Europe

7. Eastern Europe

10. North Africa and Middle East

13. West Africa

2. Central Africa

5. East Africa

8. Southern Africa

11. Siberia

14. Central Asia

3. South Asia

6. East Asia

9. Southeast Asia

12. Australia

15. Antarctica