













Telling time Worksheet

Write the time.

<p>1 a.</p>  <p style="text-align: center;">_____ : _____</p>	<p>1 b.</p>  <p style="text-align: center;">_____ : _____</p>	<p>1 c.</p>  <p style="text-align: center;">_____ : _____</p>
<p>2 a.</p>  <p style="text-align: center;">_____ : _____</p>	<p>2 b.</p>  <p style="text-align: center;">_____ : _____</p>	<p>2 c.</p>  <p style="text-align: center;">_____ : _____</p>
<p>3 a.</p>  <p style="text-align: center;">_____ : _____</p>	<p>3 b.</p>  <p style="text-align: center;">_____ : _____</p>	<p>3 c.</p>  <p style="text-align: center;">_____ : _____</p>
<p>4 a.</p>  <p style="text-align: center;">_____ : _____</p>	<p>4 b.</p>  <p style="text-align: center;">_____ : _____</p>	<p>4 c.</p>  <p style="text-align: center;">_____ : _____</p>

Name: _____ Date: _____

Answer Key

1 a. 8:58	1 b. 0:7	1 c. 7:22
2 a. 9:49	2 b. 9:37	2 c. 3:32
3 a. 6:57	3 b. 0:47	3 c. 6:26
4 a. 4:10	4 b. 9:7	4 c. 3:21