

1st Grade Math Worksheet

Name _____

1st grade review.

1. Count the stars and fill in the numbers.



_____ tens + _____ ones

2. Circle true or false.

68 is an even number.

True

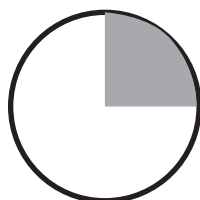
False

3. Pick the correct answer.

32 is _____ 24.

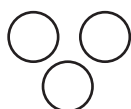
- a. greater than
- b. smaller than
- c. equal to

4. What fraction of circle is gray?

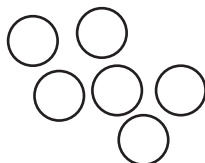


Answer: _____

5. Add the pictures below.



+



=